


puzzle 1

What time is missing in this sequence ?



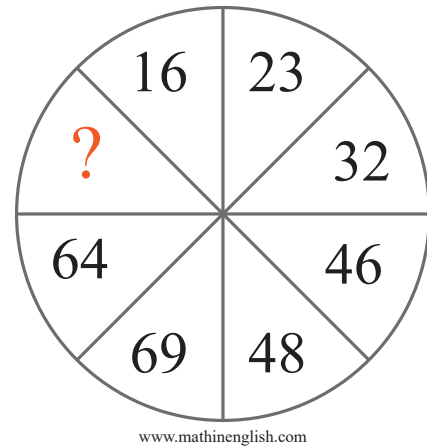
puzzle 2

What is the missing number in the following pattern ?



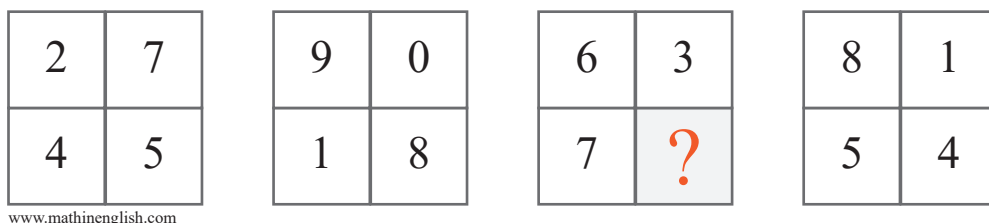
puzzle 3

Which number is needed to complete this box ?



puzzle 4

Which number completes the puzzle ?



## Answer to brain teasers

**puzzle 1 :** 1:11

8:58 - 5:35 = 3:23, 5:35 - 3: 23 = 2:12 and so on.

**puzzle 2 :** 8

Multiply the left and right cell in the 1st row to get the digits in the middle ( $E \times 5 = 25$ , or 2 E).

**puzzle 3 :** 92

Starting with 16 and 23, each next number is the next multiple of 16 and 23.

**puzzle 4 :** 2

Both the 2 top digits and bottom digits in each square add up to 9.