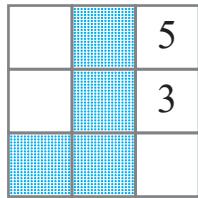
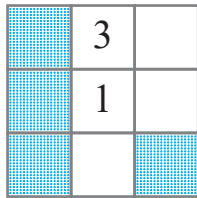
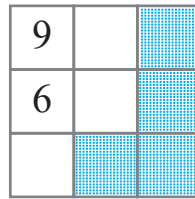
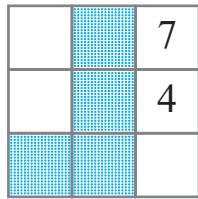
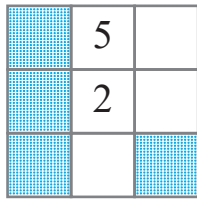
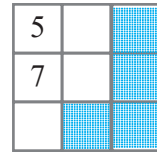


puzzle 1

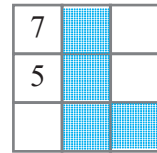
Which option is needed to complete this pattern ?



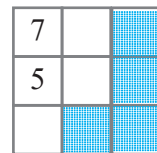
(A)



(B)



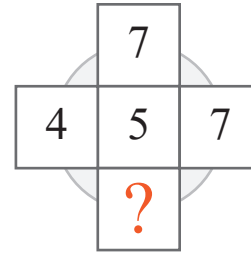
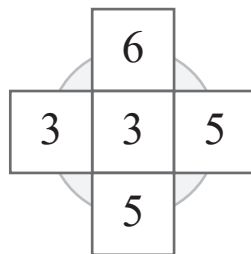
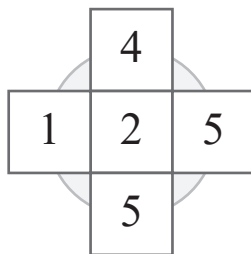
(C)



www.mathinenglish.com

puzzle 2

Which number completes the puzzle ?



www.mathinenglish.com

puzzle 3

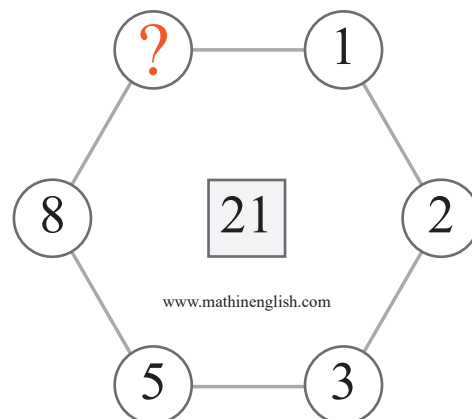
What is the missing number in the following brain teaser ?



www.mathinenglish.com

puzzle 4

Which number should replace the question mark ?



www.mathinenglish.com

Answer to brain teasers

puzzle 1 : C

Each shaded part and symbol moves 1 step in the next square.

The numbers go up by +2.

puzzle 2 : 7

The difference between the horizontal and vertical number in each cross is 300.

puzzle 3 : 4

Multiply the 1st and 2nd digit in each column to get the 3rd and 4th.

puzzle 4 : 13

Starting at the 1, 1 and 3 make 3, 2 and 3 make 5, and so on (Fibonacci).