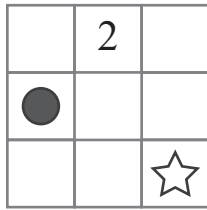
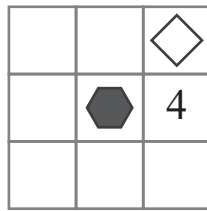
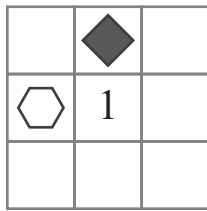
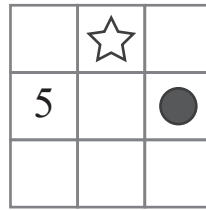
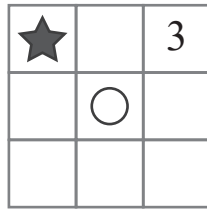


puzzle 1

Which option completes this pattern ?



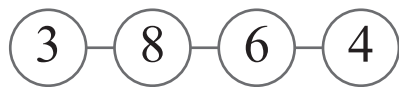
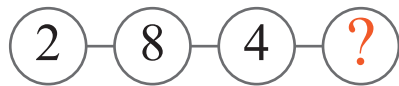
www.mathinenglish.com



- (A)
- (B)
- (C)

puzzle 2

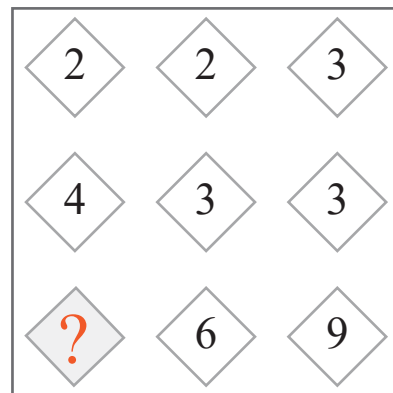
What is the missing number in the following pattern ?



www.mathinenglish.com

puzzle 3

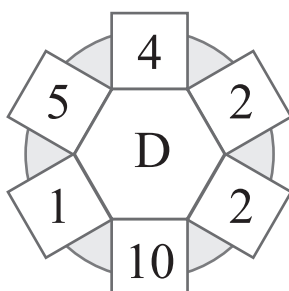
Which number is needed to complete this puzzle ?



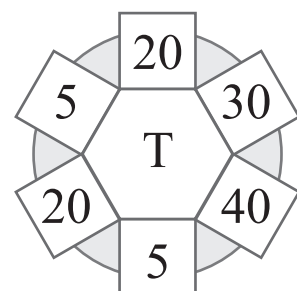
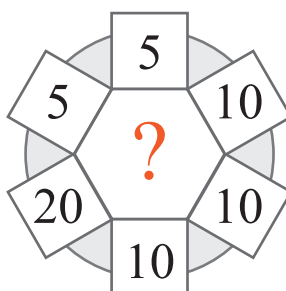
www.mathinenglish.com

puzzle 4

Which letter completes the puzzle ?



www.mathinenglish.com



## Answer to brain teasers

**puzzle 1 :** C

The numbers and symbols move 1 place in the next square. The symbols change from shaded to non shaded and the numbers of the first 2 squares add up to the one in the 3rd.

**puzzle 2 :** 4

The first 2 cells in each row multiplied are equal to the product of the 3rd and 4th cell.

**puzzle 3 :** 8

Multiply the first 2 numbers in each column to get the 3rd.

**puzzle 4 :** J

The letter in the center is the average of the other numbers in each set.