


puzzle 1

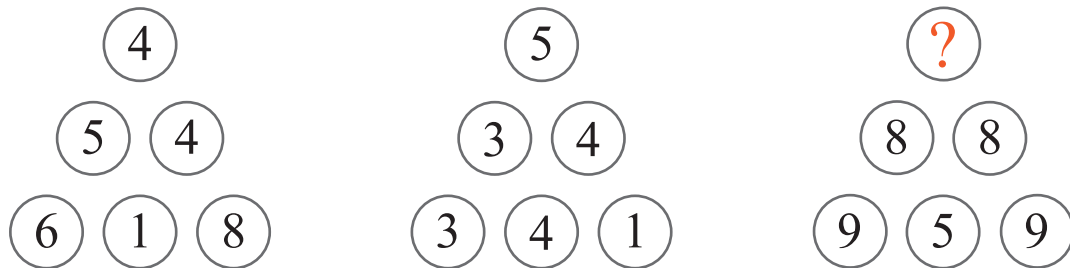
Which option is needed to complete this pattern ?



www.mathinenglish.com

puzzle 2

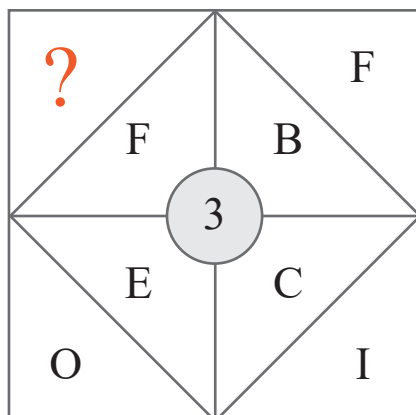
Which number completes this sequence ?



www.mathinenglish.com

puzzle 3


What is the missing letter in the shape pattern ?



www.mathinenglish.com

puzzle 4

What is the missing number in this pattern ?



www.mathinenglish.com

Answer to brain teasers

puzzle 1 : C

In each vertical pair there are 9 shaded squares.

puzzle 2 : 9

The cells of the first 2 pyramids add up the identical one in the 3rd.

puzzle 3 : R

3 times F equals 18, which is the letter value of R.

puzzle 4 : 5

Multiply the 1st cell in each row by 4 to get the digits in the 2nd and 3rd cell.