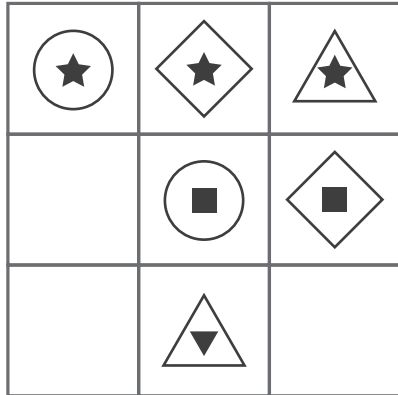
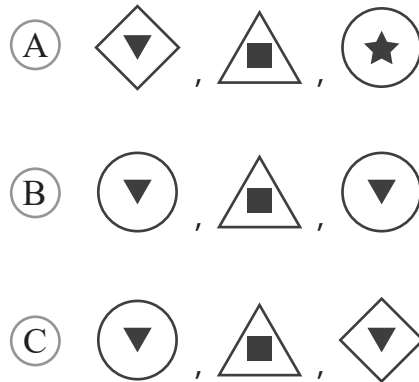


puzzle 1

Which 3 shapes and symbol combinations are needed to complete the pattern ?




www.mathinenglish.com



puzzle 2

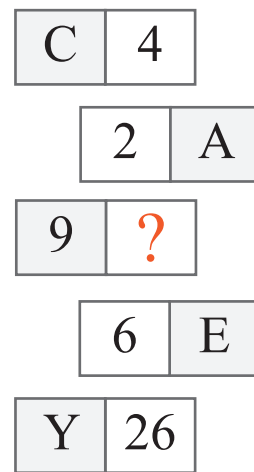
What is the missing number in this puzzle ?



www.mathinenglish.com

puzzle 3

Which letter completes the pattern ?



www.mathinenglish.com

puzzle 4

What number completes the sequence ?

3	5
9	7

10	12
16	14

6	8
12	?

7	9
13	11

www.mathinenglish.com

Answer to brain teasers

puzzle 1 : C

Each row contains a circle, diamond and triangle, filled with the same solid shape.

puzzle 2 : 6

Subtract the 2nd row from the 1st row to get the 3rd row.

puzzle 3 : H

The number is 1 more than the value of the letter number in each row.

puzzle 4 : 10

The cells in the squares are following a + 2 pattern.