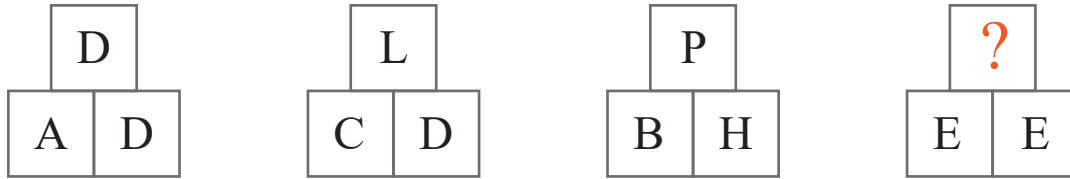


puzzle 1

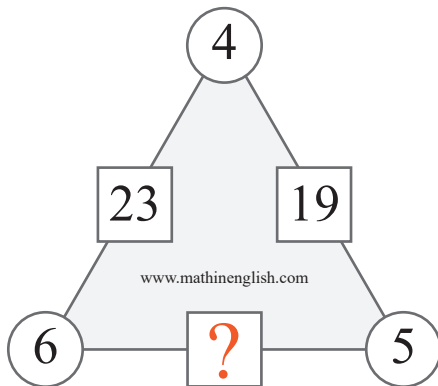
Which letter completes this pattern ?



www.mathinenglish.com

puzzle 2

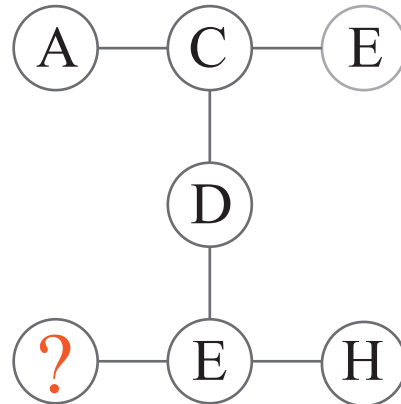
Which number completes this puzzle ?



www.mathinenglish.com

puzzle 3

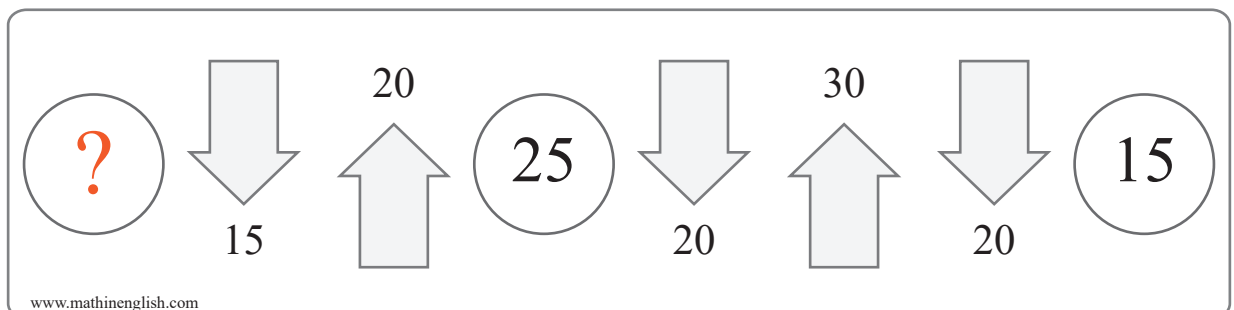
Which number should replace the question mark ?



www.mathinenglish.com

puzzle 4

Which number completes this math puzzle ?



www.mathinenglish.com

Answer to brain teasers

puzzle 1 : Y
E times E, 5 times 5, equals 25 or Y.

puzzle 2 : 29
6 times 5 minus 1.

puzzle 3 : B
B = 2, H = 8, with an average of 5, or E.

puzzle 4 : 20
20 minus 15 plus 20 equals 25.