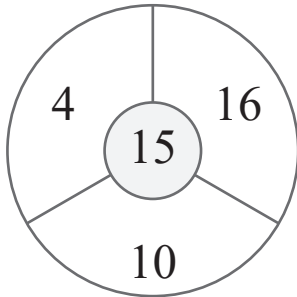
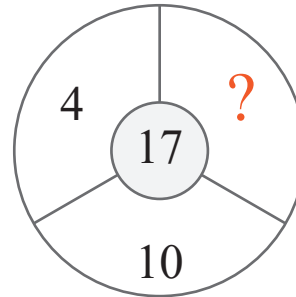
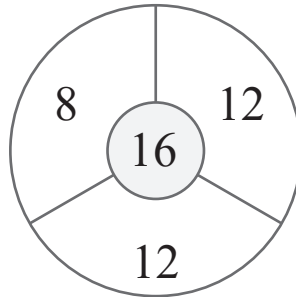


puzzle 1

Which number completes this math pattern ?

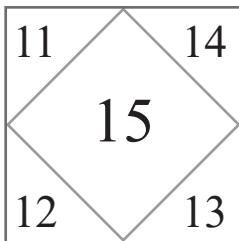


www.mathinenglish.com

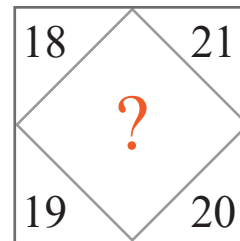
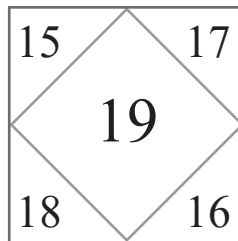


puzzle 2

Which number replaces the question mark and completes this pattern ?

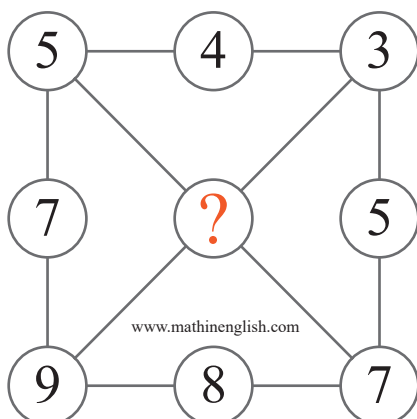


www.mathinenglish.com



puzzle 3

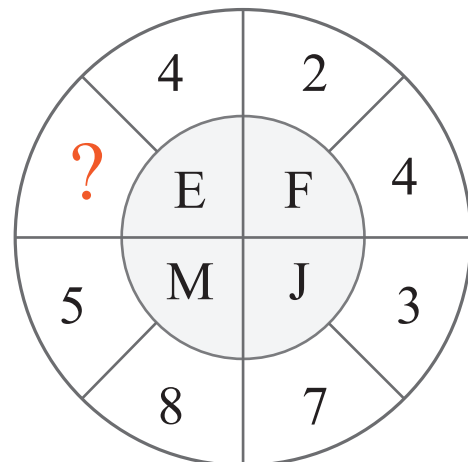
Which number completes this puzzle ?



www.mathinenglish.com

puzzle 4

Which number is missing ?



www.mathinenglish.com

## Answer to brain teasers

**puzzle 1 :** 20

The sum of the 3 outer numbers is 34, and divided by 2, will give the value of the core number .

**puzzle 2 :** 22

22 completes the 18 to 22 range.

**puzzle 3 :** 6

The average of 5 and 7 is 6.

**puzzle 4 :** 1

1 and 4 add up to 5, the value of the letter number E.