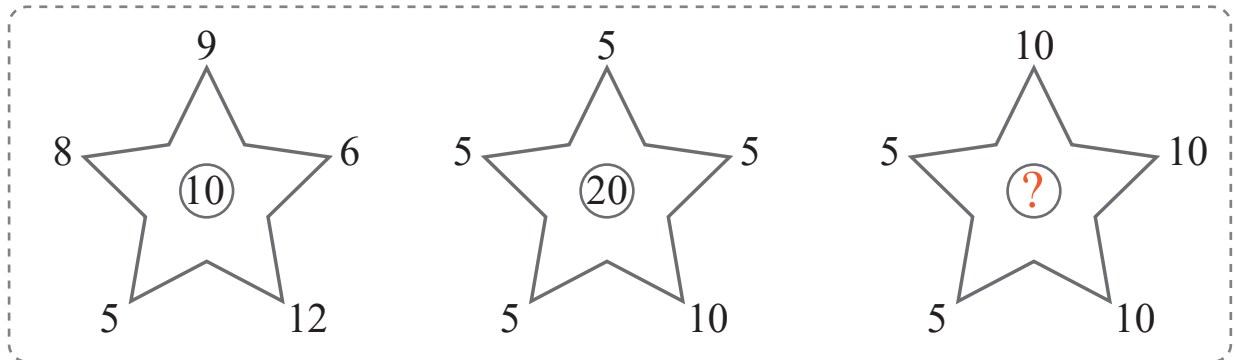


puzzle 1

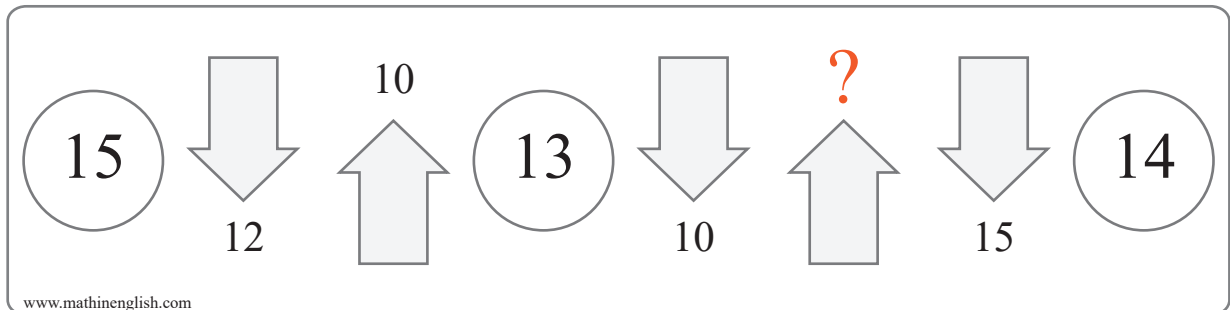
Which number will complete these number patterns.



www.mathinenglish.com

puzzle 2

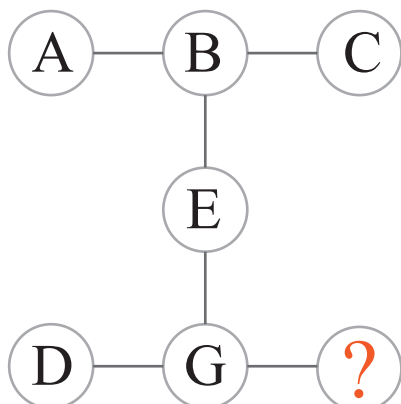
Which number makes this math puzzle correct ?



www.mathinenglish.com

puzzle 3

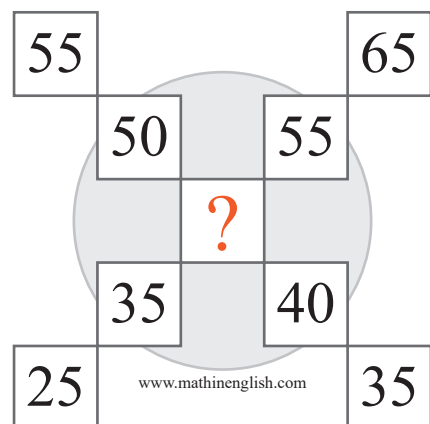
Which letter completes this puzzle ?



www.mathinenglish.com

puzzle 4

Which 2 digit number should replace the question mark ?



www.mathinenglish.com

Answer to brain teasers

puzzle 1 : 10

All numbers in the star add up to 50.

puzzle 2 : 26

Fill in 26 and calculate.

puzzle 3 : K

D plus G equal 11, or K.

puzzle 4 : 45

The middle cell is part of 2 patterns. Upwards + 10 and downwards -5.