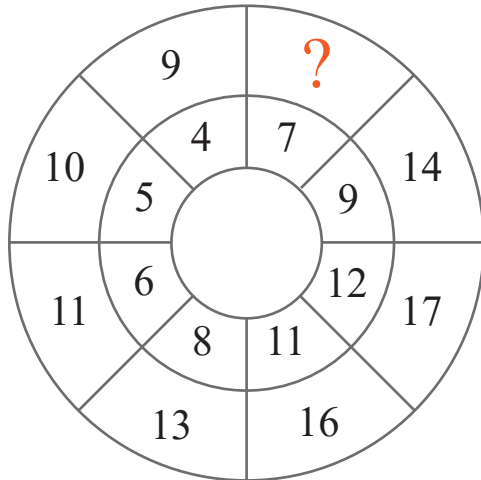


puzzle 1


What 2 digit-number completes the number wheel ?



www.mathinenglish.com

puzzle 2

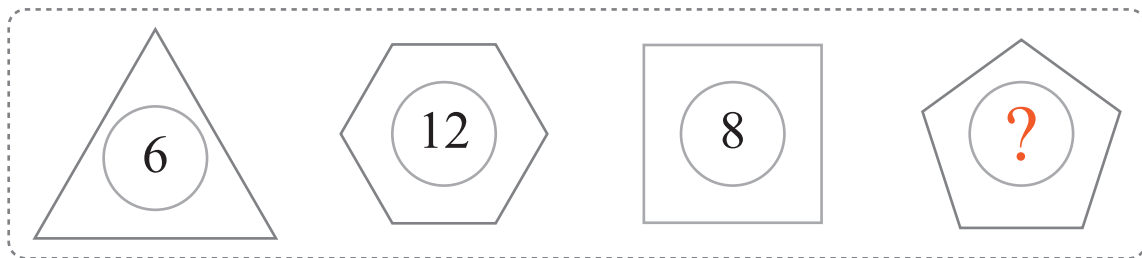
What is the missing letter in this pattern ?



www.mathinenglish.com

puzzle 3

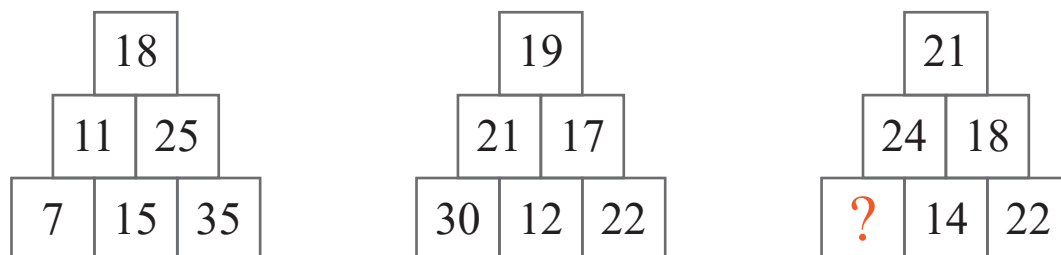
Which number completes this shape sequence ?



www.mathinenglish.com

puzzle 4

Which number completes this number pattern ?



www.mathinenglish.com

Answer to brain teasers

puzzle 1 : 12

The difference between 12 and 7 is 5, just as with all the other combinations in the circle.

puzzle 2 : E

Each row follows a decreasing pattern by 2. E minus 2 is a C.

puzzle 3 : 10

Multiply the number of sides of each shape by 2.

puzzle 4 : 34

The cell above 2 cells is the average of these 2 cells.