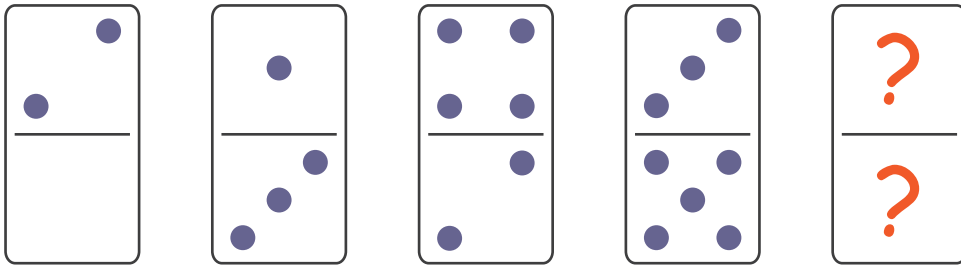


puzzle 1

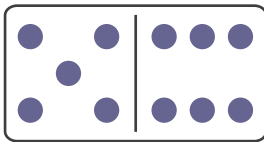
Which domino completes the row ?



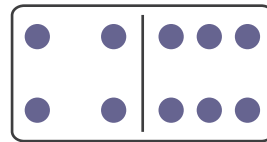
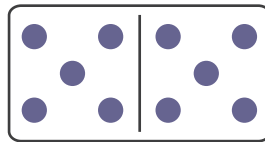
(A)

(B)

(C)

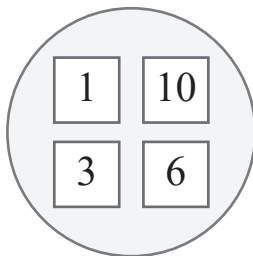


www.mathinenglish.com

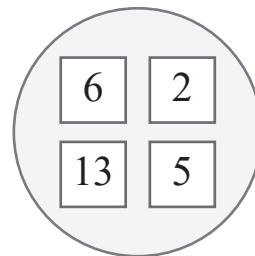
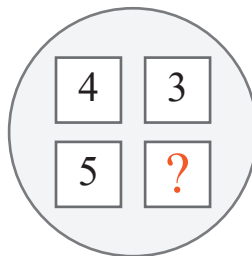


puzzle 2

Which number completes the sequence ?

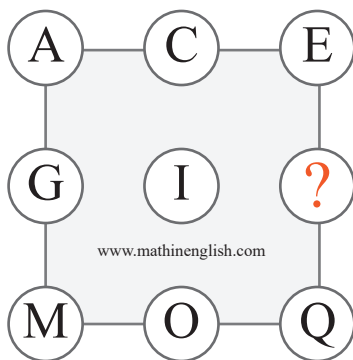


www.mathinenglish.com



puzzle 3

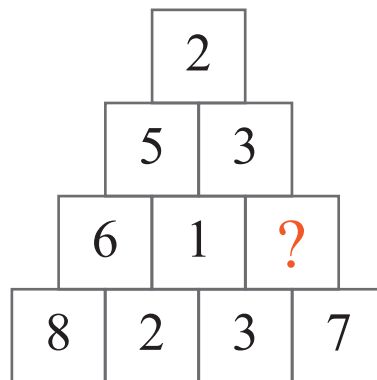
What is the missing letter in the following letter sequence ?



www.mathinenglish.com

puzzle 4

Which number is needed to complete the pyramid ?



www.mathinenglish.com

## Answer to brain teasers

**puzzle 1 :** C

The dominoes follow a 0-2, 1-3, 2-4 pattern, with a difference of 2 between the top and bottom.

**puzzle 2 :** 12

The numbers 4, 3 and 5 add up to 12.

**puzzle 3 :** K

The letter value increases by 2 each next cell.

**puzzle 4 :** 4

The difference between 3 and 7.