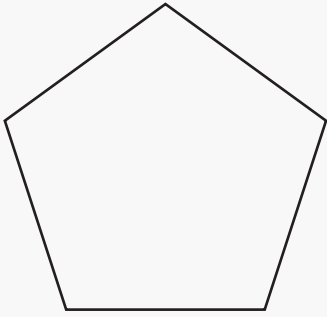


# Polygons and Sides

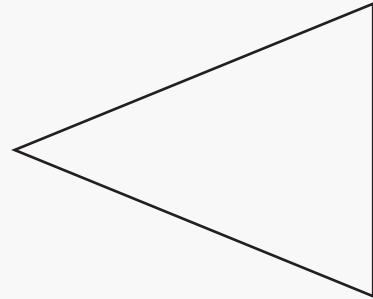
Name: \_\_\_\_\_ Class: \_\_\_\_\_

Name the following polygons and count the number of sides.



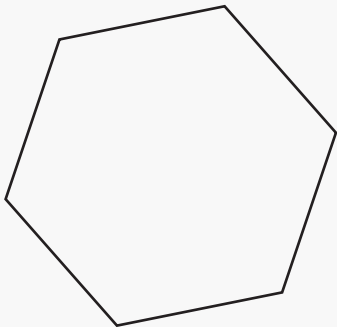
Name: \_\_\_\_\_

Sides: \_\_\_\_\_



Name: \_\_\_\_\_

Sides: \_\_\_\_\_



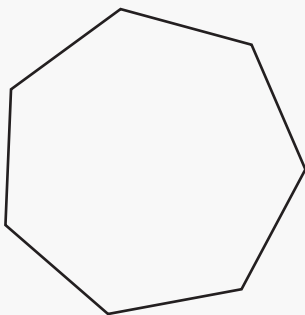
Name: \_\_\_\_\_

Sides: \_\_\_\_\_




Name: \_\_\_\_\_

Sides: \_\_\_\_\_



Name: \_\_\_\_\_

Sides: \_\_\_\_\_

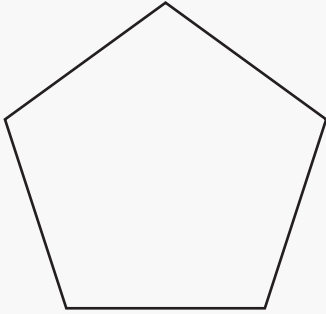


Name: \_\_\_\_\_

Sides: \_\_\_\_\_

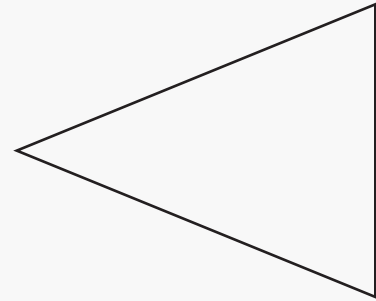
# Answers

Name the following polygons and count the number of sides.



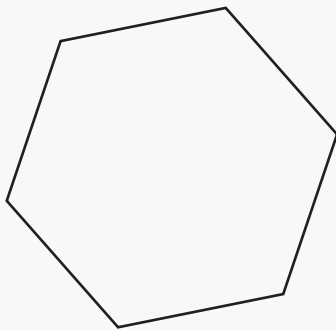
Name: pentagon

Sides: 5



Name: triangle

Sides: 3



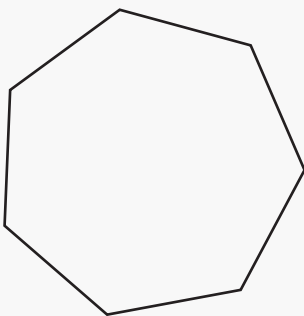
Name: hexagon

Sides: 6




Name: rectangle

Sides: 4



Name: heptagon

Sides: 7



Name: square

Sides: 4