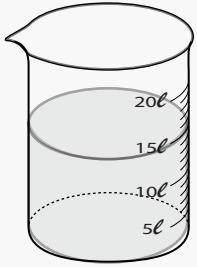


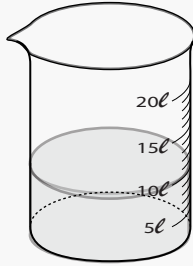
Volume of water

Name: _____ Class: _____

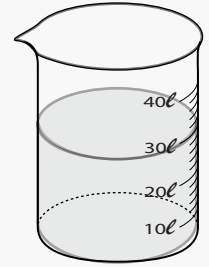
What is the volume of water in the following containers?



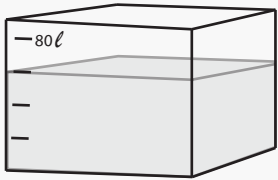
Volume: _____



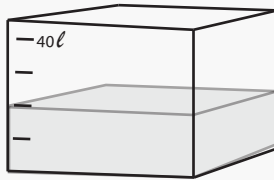
Volume: _____



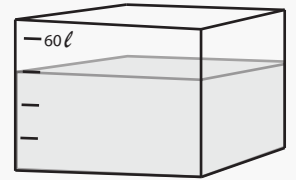
Volume: _____



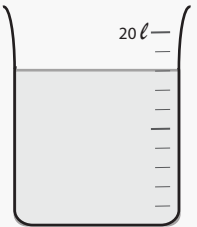
Volume: _____



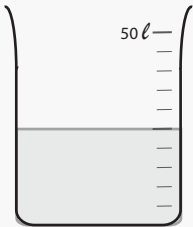
Volume: _____



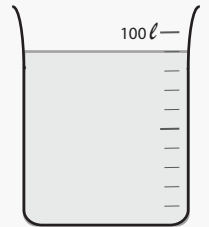
Volume: _____




Volume: _____




Volume: _____




Volume: _____



Volume: _____



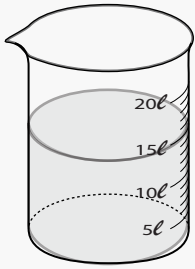
Volume: _____



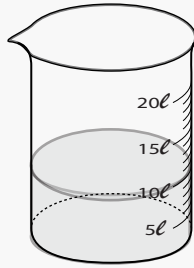
Volume: _____

Answers

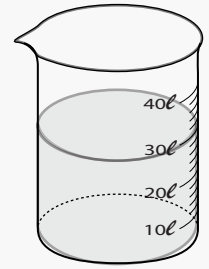
What is the volume of water in the following containers?



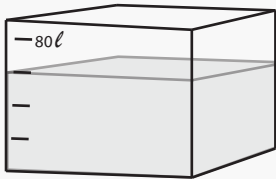
Volume: 15 liters



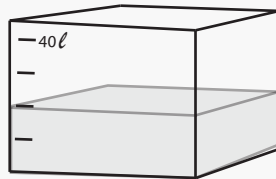
Volume: 10 liters



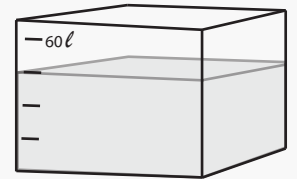
Volume: 30 liters



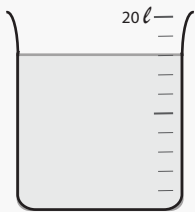
Volume: 60 liters



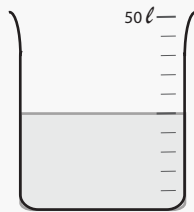
Volume: 20 liters



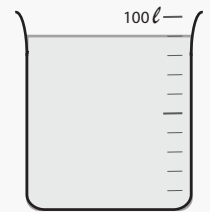
Volume: 45 liters




Volume: 16 liters




Volume: 25 liters




Volume: 90 liters



Volume: 15 liters



Volume: 5 liters



Volume: 45 liters