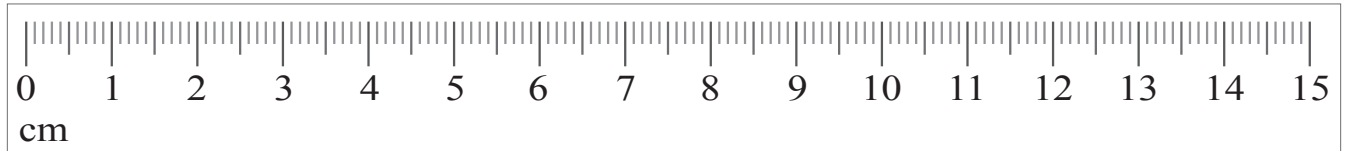
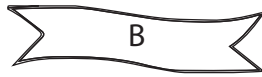


Measure Ribbons

Name: _____ Class: _____

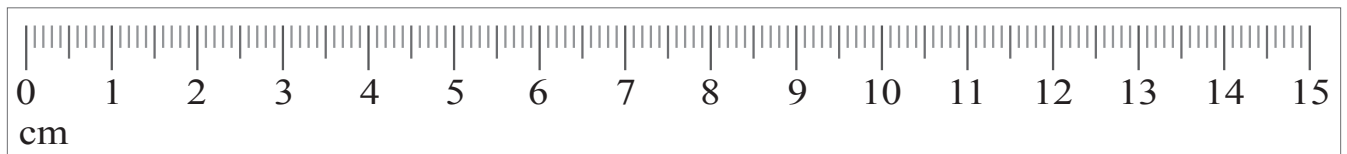
Use the ruler and measure the length of the ribbons to the nearest centimeter..



Ribbon A = _____

Ribbon B = _____

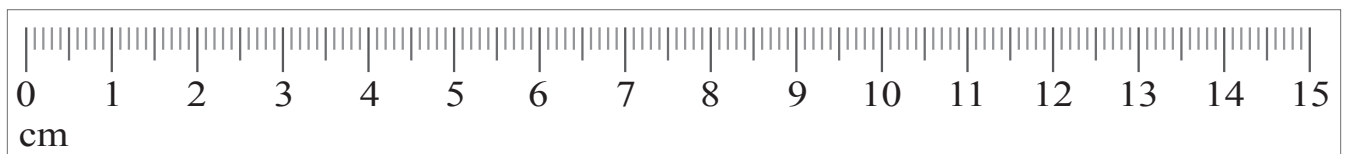
Ribbon C = _____



Ribbon D = _____

Ribbon E = _____

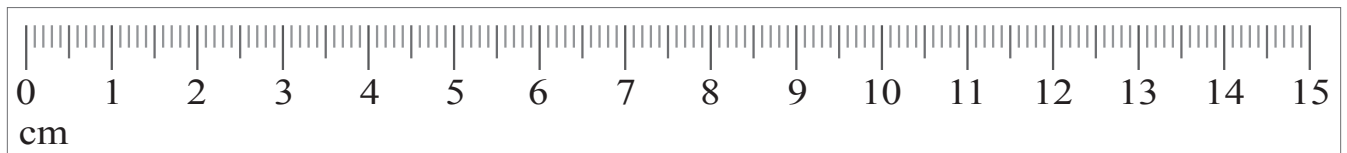
Ribbon F = _____



Ribbon G = _____

Ribbon H = _____

Ribbon I = _____



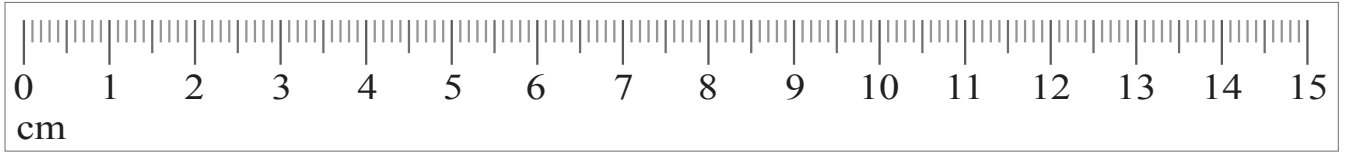
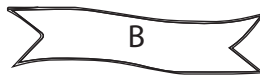
Ribbon J = _____

Ribbon K = _____

Ribbon L = _____

Answers

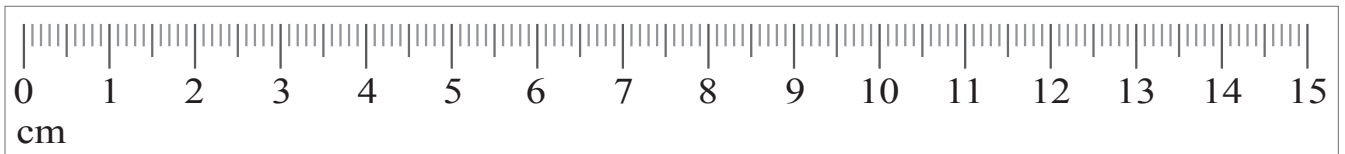
Use the ruler and measure the length of the ribbons to the nearest centimeter..



Ribbon A = 4 cm

Ribbon B = 3 cm

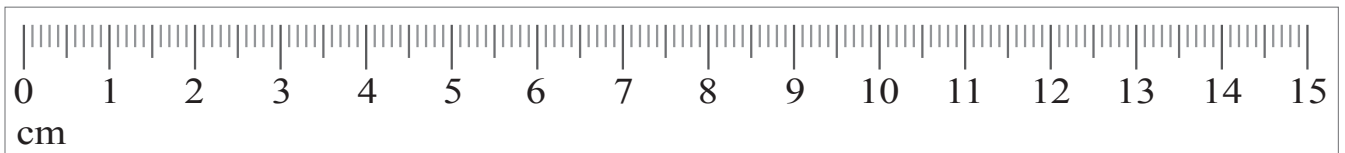
Ribbon C = 5 cm



Ribbon D = 2 cm

Ribbon E = 2 cm

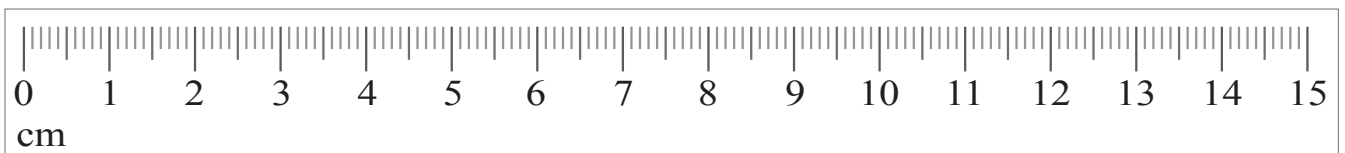
Ribbon F = 8 cm



Ribbon G = 3 cm

Ribbon H = 9 cm

Ribbon I = 1 cm



Ribbon J = 4 cm

Ribbon K = 4 cm

Ribbon L = 4 cm