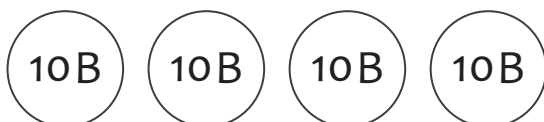
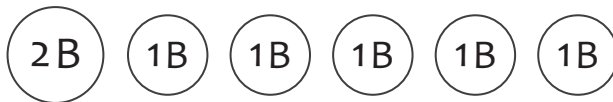
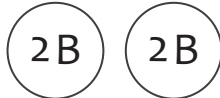


Counting money?

Count the coins, and write your answer in Baht



_____ Baht



Counting money?

Count the coins, and write your answer in Baht



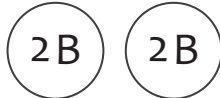
5 Baht



8 Baht



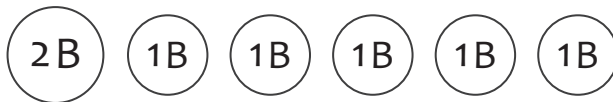
10 Baht



4 Baht



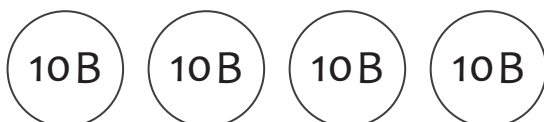
6 Baht



7 Baht



20 Baht



40 Baht