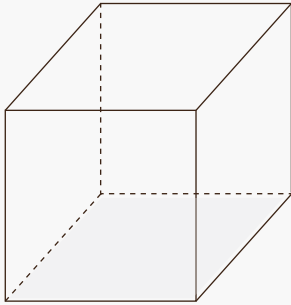


Identify the 3D shape

Name: _____ Class: _____

Read the clues and draw both the 3D shape and its net model.

- 1) I have 6 squared faces.



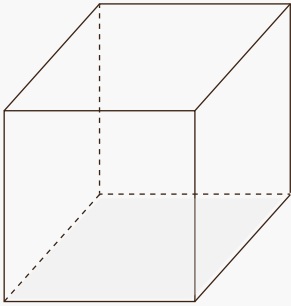
- 2) I have 6 quadrilateral faces.

- 3) I have 2 triangular faces and 3 quadrilateral faces.

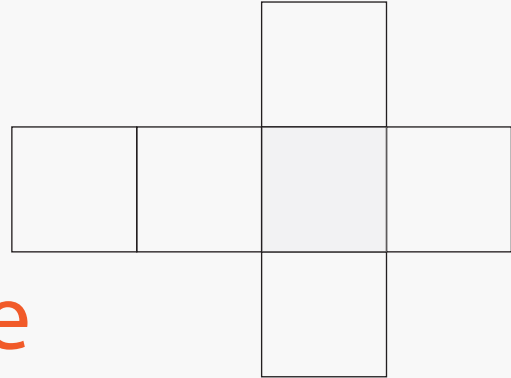
Answers

Read the clues and draw both the 3D shape and its net model.

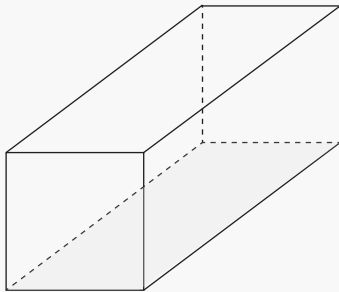
1) I have 6 squared faces.



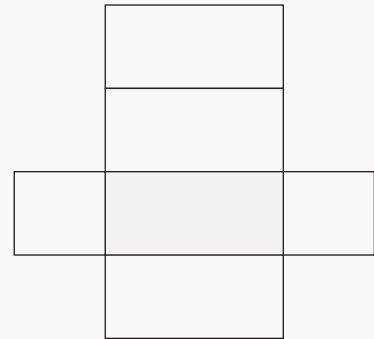
Cube



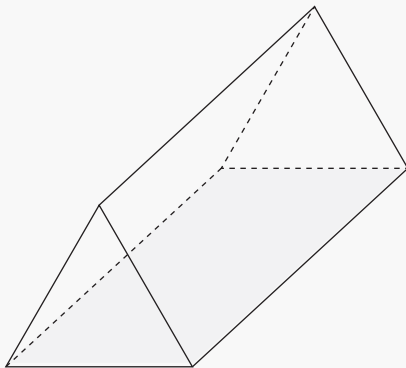
2) I have 6 quadrilateral faces.



Cuboid



3) I have 2 triangular faces and 3 quadrilateral faces.



(triangular)
Prism

