


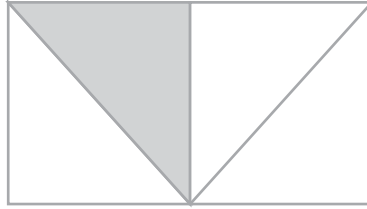
# What Percentage is Shaded?

Name: \_\_\_\_\_ Score: \_\_\_\_\_

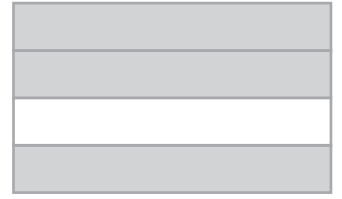
What Percentage of the following figures is shaded?



Shaded: \_\_\_\_\_



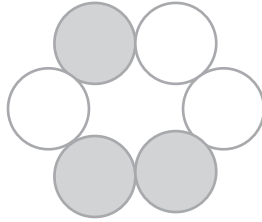
Shaded: \_\_\_\_\_



Shaded: \_\_\_\_\_



Shaded: \_\_\_\_\_



Shaded: \_\_\_\_\_



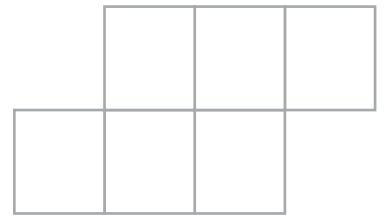
Shaded: \_\_\_\_\_




Shaded: \_\_\_\_\_



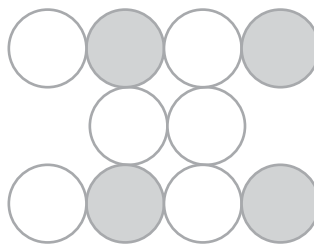
Shaded: \_\_\_\_\_



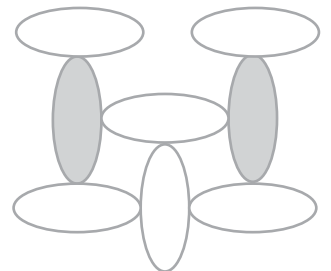
Shaded: \_\_\_\_\_



Shaded: \_\_\_\_\_



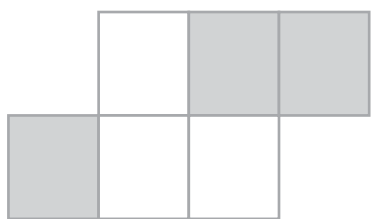
Shaded: \_\_\_\_\_



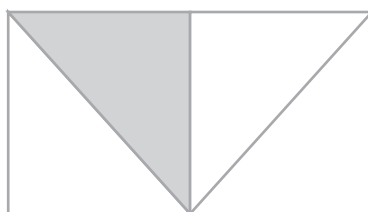
Shaded: \_\_\_\_\_

# Answers

What Percentage of the following figures is shaded?



Shaded: 50%



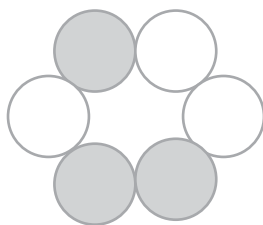
Shaded: 25%




Shaded: 75%



Shaded: 25%



Shaded: 50%



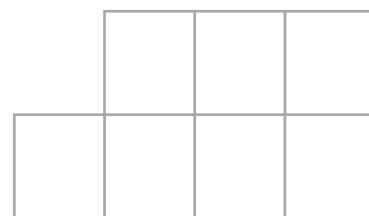
Shaded: 50%




Shaded: 20%



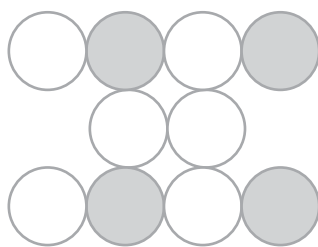
Shaded: 30%



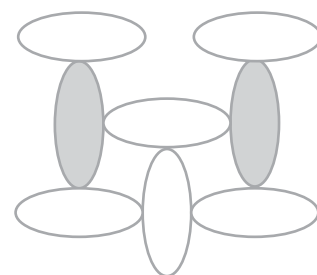
Shaded: 0%



Shaded: 60%



Shaded: 40%



Shaded: 25%