

# Averages of Sets

Name: \_\_\_\_\_ Score: \_\_\_\_\_

Calculate the averages of the following sets of numbers.

55 15 42  
12 76 21 24  
80 40 75

Average =

17 56 33 29 99  
58  
25 38 77 48 70

Average =

67 87 24 84 23  
44 11 45  
13 65 36 80 71

Average =

33 95  
130 89 38 29  
60 77 70

Average =

25 60 150  
156 140 44  
50 175

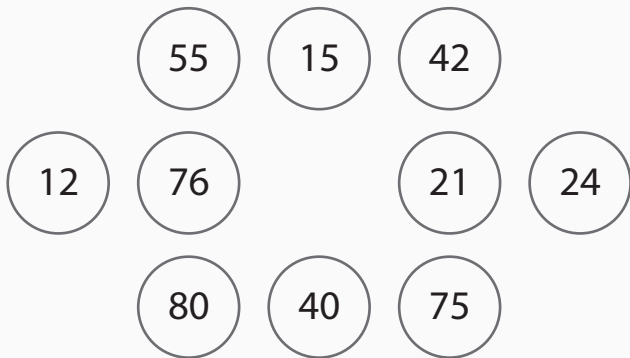
Average =

120 234 266 378 222  
111 455 114 412 901  
116 240 567 109 255

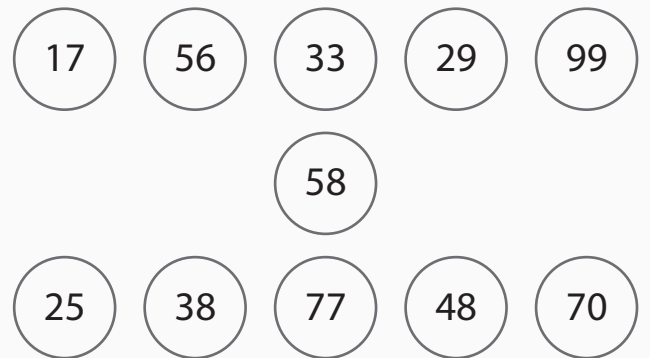
Average =

# Answers

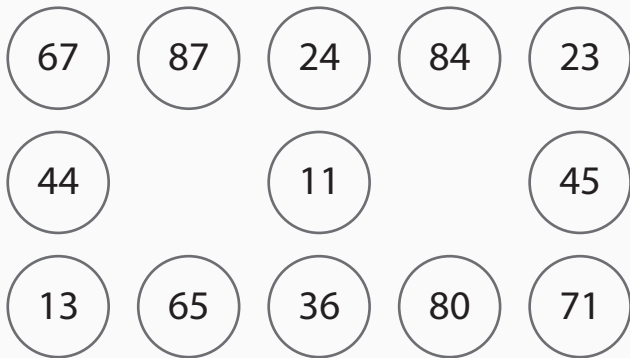
Calculate the averages of the following sets of numbers.



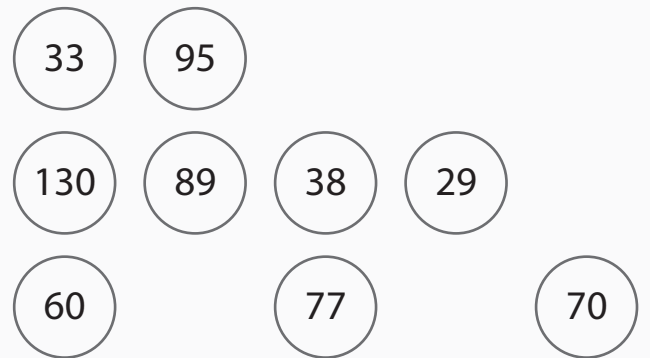
Average = **44**



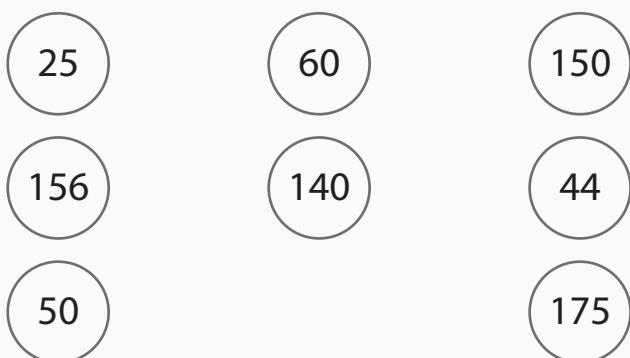
Average = **50**



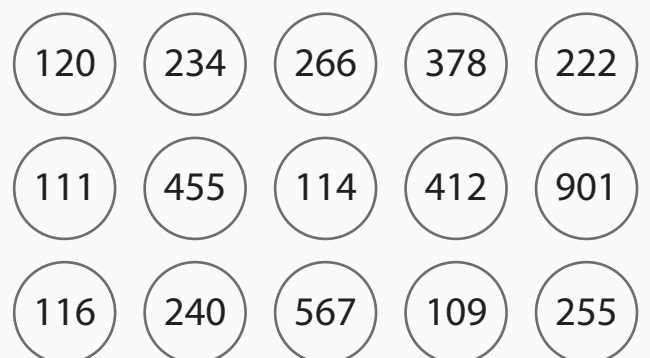
Average = **50**



Average = **69**



Average = **100**



Average = **300**