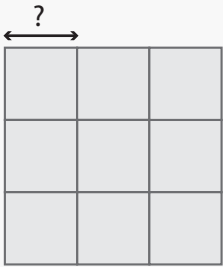


Length of 1 Small Block

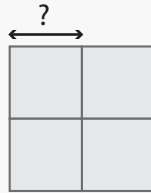
Name: _____ Class: _____

Find the length of 1 small square block given the perimeters of the figures.



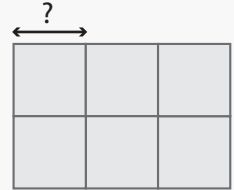
Perimeter: 36 cm

Length of 1 block: _____



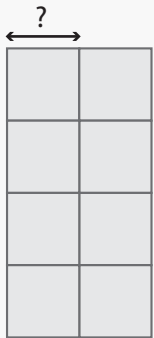
Perimeter: 40 cm

Length of 1 block: _____



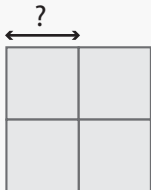
Perimeter: 40 cm

Length of 1 block: _____



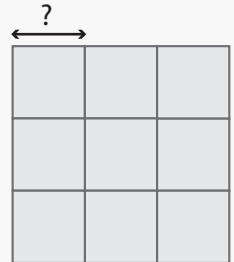
Perimeter: 60 cm

Length of 1 block: _____



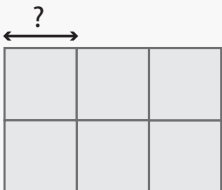
Perimeter: 32 cm

Length of 1 block: _____



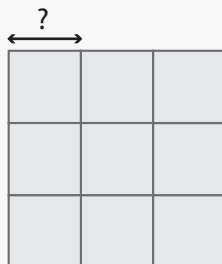
Perimeter: 72 cm

Length of 1 block: _____



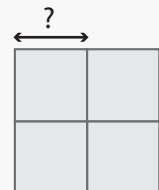
Perimeter: 30 cm

Length of 1 block: _____



Perimeter: 24 cm

Length of 1 block: _____

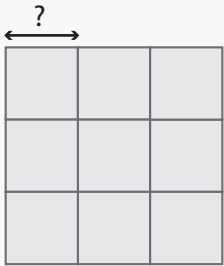


Perimeter: 24 cm

Length of 1 block: _____

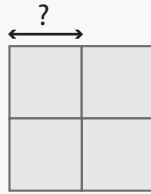
Answers

Find the length of 1 small square block given the perimeters of the figures.



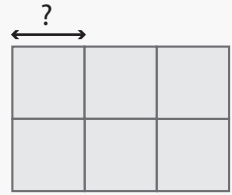
Perimeter: 36 cm

Length of 1 block: 3 cm



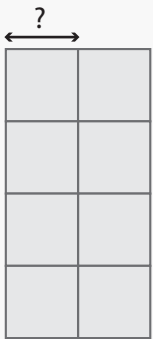
Perimeter: 40 cm

Length of 1 block: 5 cm



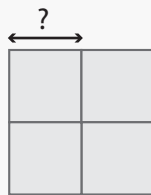
Perimeter: 40 cm

Length of 1 block: 4 cm



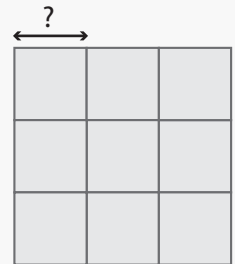
Perimeter: 60 cm

Length of 1 block: 5 cm



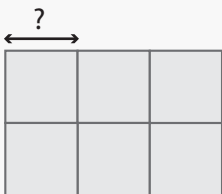
Perimeter: 32 cm

Length of 1 block: 4 cm



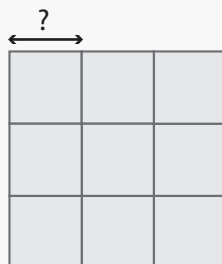
Perimeter: 72 cm

Length of 1 block: 6 cm



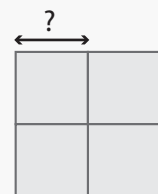
Perimeter: 30 cm

Length of 1 block: 3 cm



Perimeter: 24 cm

Length of 1 block: 2 cm



Perimeter: 24 cm

Length of 1 block: 3 cm