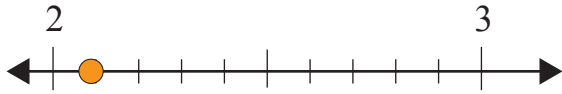


Rounding Off to Nearest Whole Number

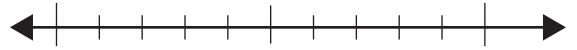
Name: _____ Score: _____

Use the number lines and round the numbers off to the nearest whole number.

2.1



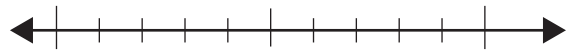
0.6



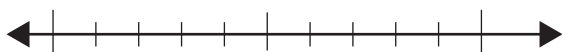
3.2



7.5




15.8




14.9



20.3



33.7



Answers

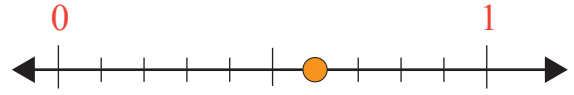
Use the number lines and round the numbers off to the nearest whole number.

2.1



2

0.6



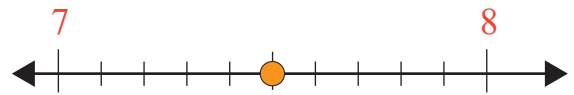
1

3.2



3

7.5



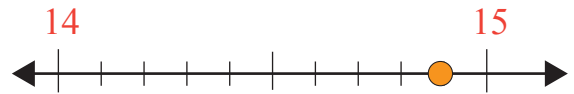
8

15.8



16

14.9



15

20.3



20

33.7



34