

# Decimal Number Line (Hundredths)

Name: \_\_\_\_\_ Score: \_\_\_\_\_

Use the number lines to write the decimal value of the letters.



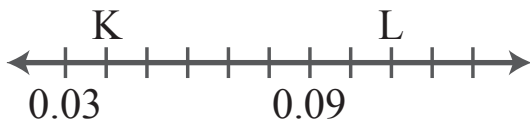
N =

O =



R =

S =



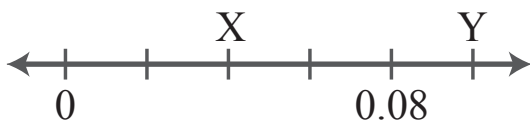
K =

L =



A =

B =



X =

Y =



U =

W =

# Answers

Use the number lines to write the decimal value of the letters.



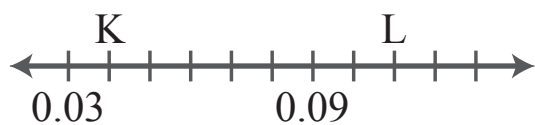
$$N = 0.32$$

$$O = 0.38$$



$$R = 0.01$$

$$S = 0.09$$



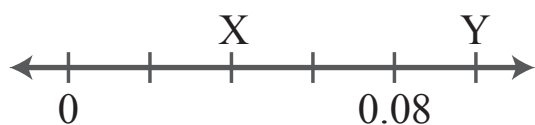
$$K = 0.04$$

$$L = 0.11$$



$$A = 2.21$$

$$B = 2.29$$



$$X = 0.04$$

$$Y = 0.1$$



$$U = 1.04$$

$$W = 1.16$$