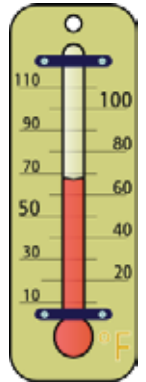
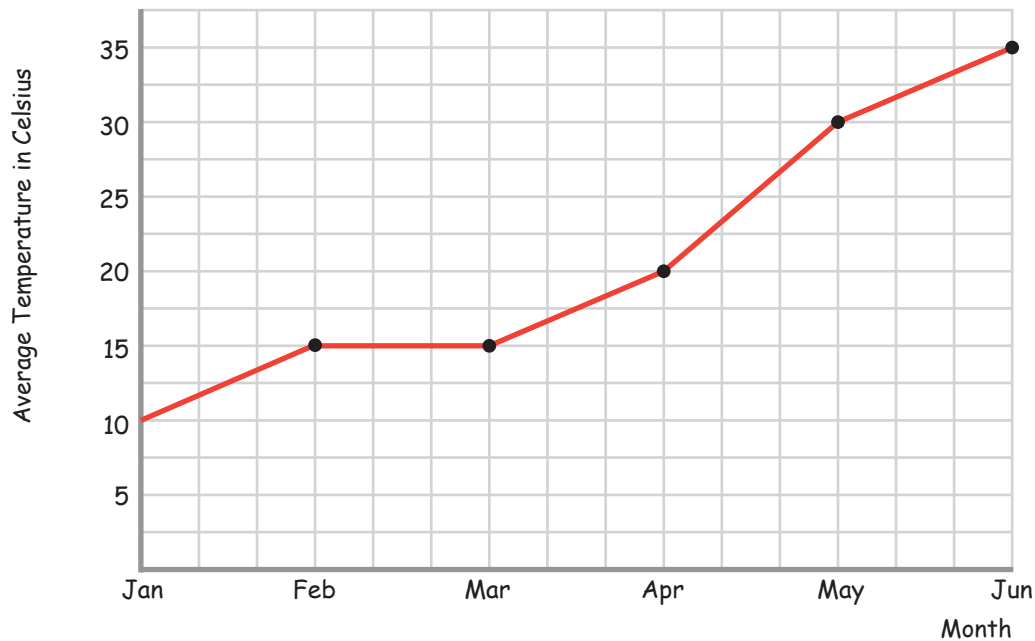


Average Temperature

Name: _____ Class: _____

Analyze the line graph, complete the data table and answer the questions.



1) Complete the data table

Month	Jan	Feb	Mar	Apr	May	Jun
Temp						

2) In which month was the average temperature 30 degrees Celsius?

3) In which 2 months was the average temperature the same?

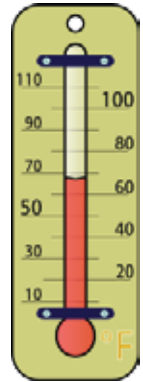
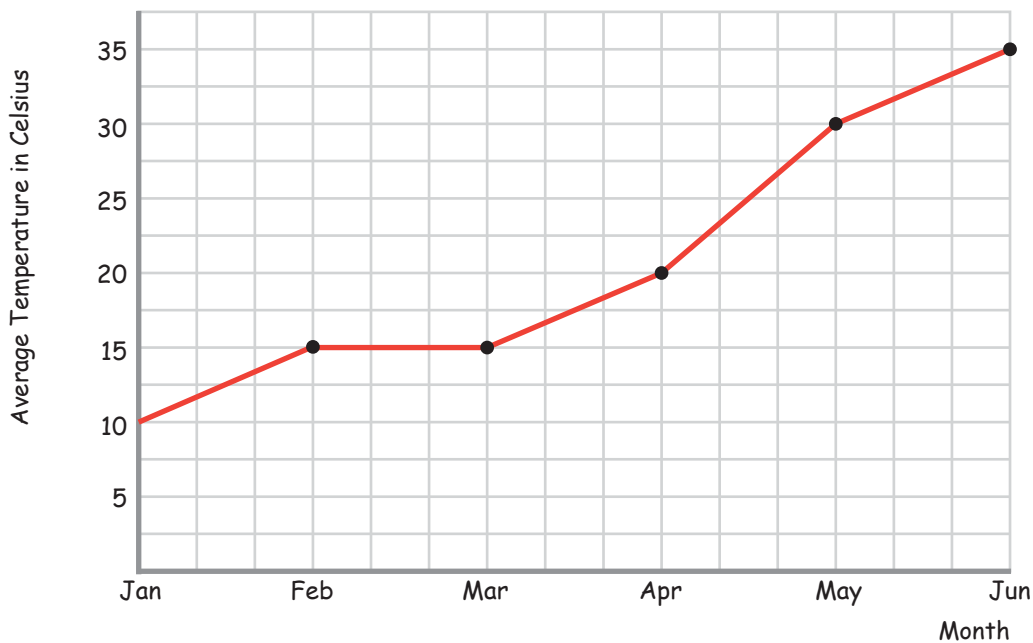
4) In which months was the average temperature higher than 20 degrees?

5) How much did the average temperature increase between January and April?

6) Between which 2 months was the increase of average temperature the biggest?

Answers

Analyze the line graph, complete the data table and answer the questions.



1) Complete the data table

Month	Jan	Feb	Mar	Apr	May	Jun
Temp	10 C	15 C	15 C	20 C	30 C	35 C

2) In which month was the average temperature 30 degrees Celsius?

in May

3) In which 2 months was the average temperature the same?

In February and March

4) In which months was the average temperature higher than 20 degrees?

in May and June

5) How much did the average temperature increase between January and April?

$20 - 10 = 10$ degrees Celcius

6) Between which 2 months was the increase of average temperature the biggest?

between April and May