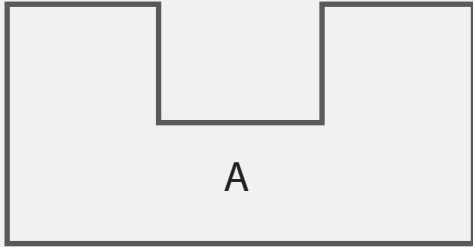


Sides and Right Angles

Name: _____ Class: _____

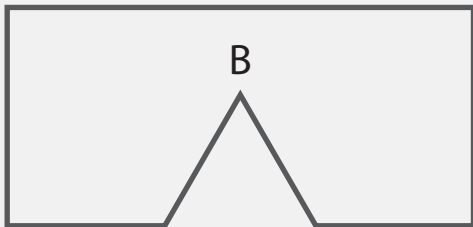
How many sides, angles and right angles does each shape have?



Shape A has _____ sides.

It has _____ angles.

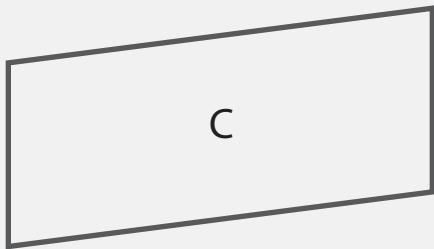
It has _____ right angles.



Shape A has _____ sides.

It has _____ angles.

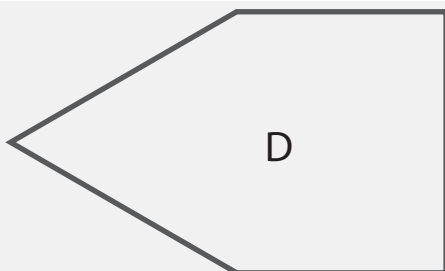
It has _____ right angles.



Shape A has _____ sides.

It has _____ angles.

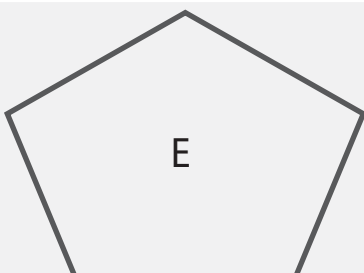
It has _____ right angles.



Shape A has _____ sides.

It has _____ angles.

It has _____ right angles.



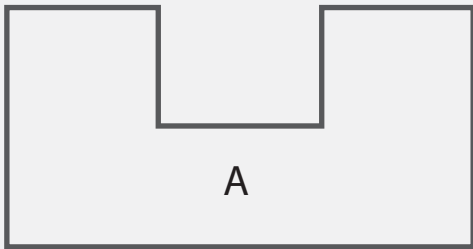
Shape A has _____ sides.

It has _____ angles.

It has _____ right angles.

Answers

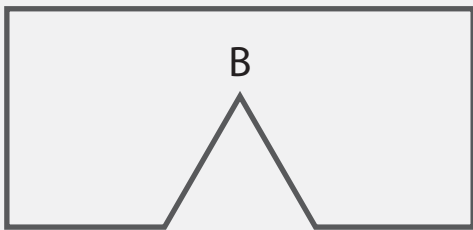
How many sides, angles and right angles does each shape have?



Shape A has 8 sides.

It has 8 angles.

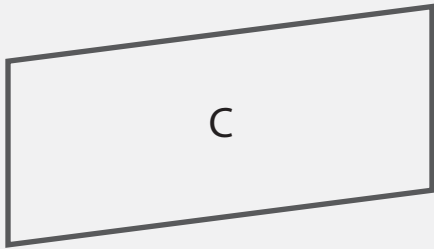
It has 6 right angles.



Shape A has 7 sides.

It has 7 angles.

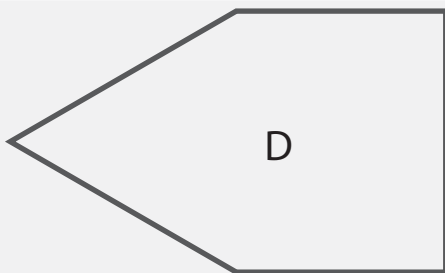
It has 4 right angles.



Shape A has 4 sides.

It has 4 angles.

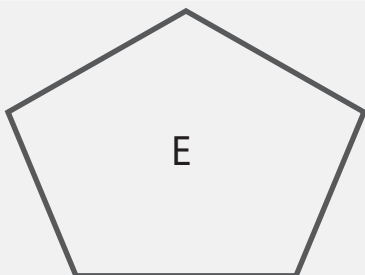
It has 0 right angles.



Shape A has 5 sides.

It has 5 angles.

It has 2 right angles.



Shape A has 5 sides.

It has 5 angles.

It has 0 right angles.