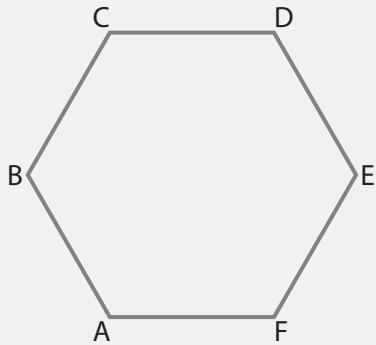


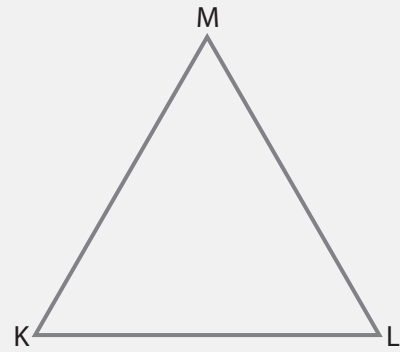
Line Segments in Shapes

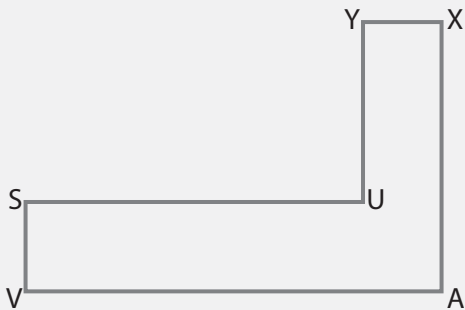
Name: _____ Class: _____

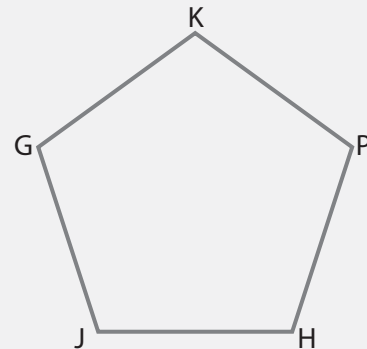
Name all the line segments that make up the following shapes.




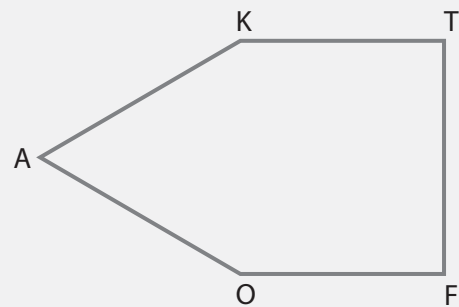
\overline{AB} , _____



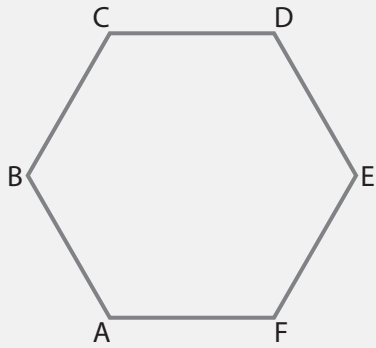




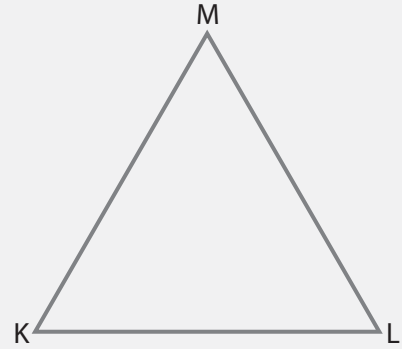




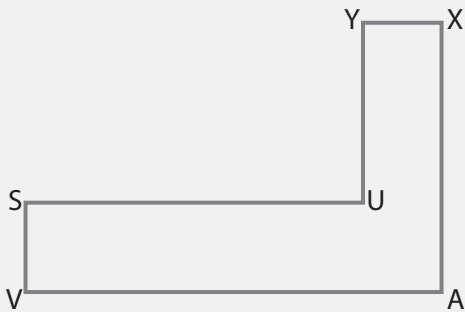
Answers



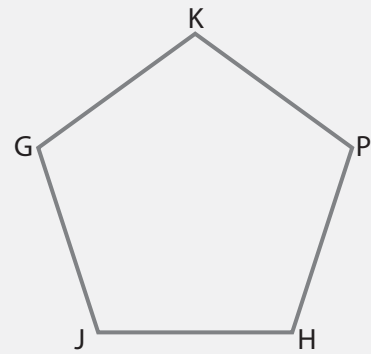
$\overline{AB}, \overline{BC}, \overline{CD}, \overline{DE}, \overline{EF}, \overline{FA}$




$\overline{KM}, \overline{ML}, \overline{LK}$



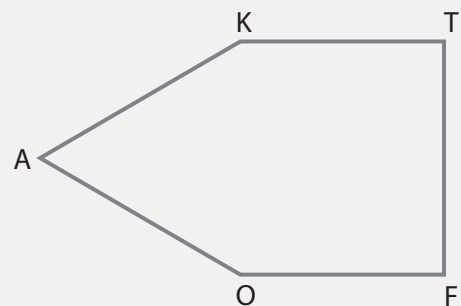
$\overline{VS}, \overline{SU}, \overline{UY}, \overline{YX}, \overline{XA}, \overline{AV}$



$\overline{JG}, \overline{GK}, \overline{KP}, \overline{PH}, \overline{HJ}$



No line segments in a circle



$\overline{AK}, \overline{KT}, \overline{TF}, \overline{FO}, \overline{OA}$