

# Place Value Charts

Name: \_\_\_\_\_ Score: \_\_\_\_\_

Write the numbers in numerals and expanded form.

Thousands	Hundreds	Tens	Ones

\_\_\_\_\_

\_\_\_\_\_

Thousands	Hundreds	Tens	Ones

\_\_\_\_\_

\_\_\_\_\_

Thousands	Hundreds	Tens	Ones

\_\_\_\_\_

\_\_\_\_\_

Thousands	Hundreds	Tens	Ones

\_\_\_\_\_

\_\_\_\_\_

Thousands	Hundreds	Tens	Ones

\_\_\_\_\_

\_\_\_\_\_

Thousands	Hundreds	Tens	Ones

\_\_\_\_\_

\_\_\_\_\_

Thousands	Hundreds	Tens	Ones

\_\_\_\_\_

\_\_\_\_\_

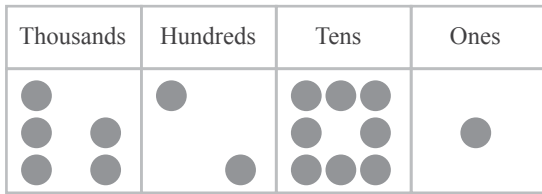
Thousands	Hundreds	Tens	Ones

\_\_\_\_\_

\_\_\_\_\_

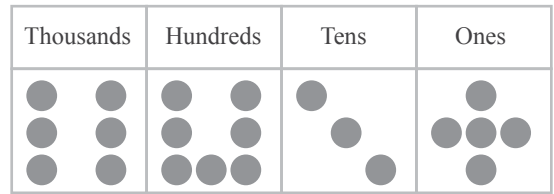
# Answers

Write the numbers in numerals and expanded form.



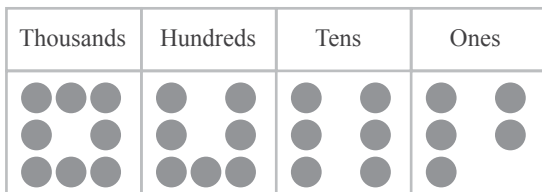
5,281

5,000 + 200 + 80 + 1



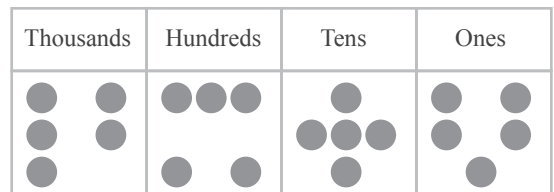
6,735

6,000 + 700 + 30 + 5



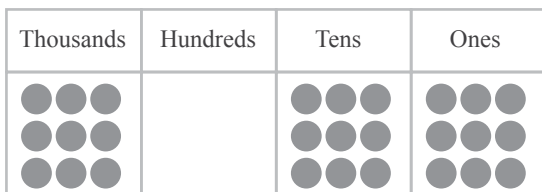
8,765

8,000 + 700 + 60 + 5



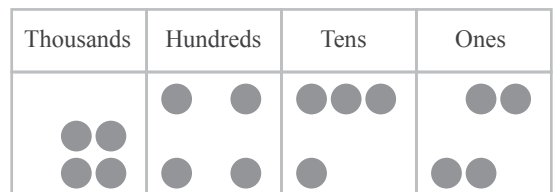
5,555

5,000 + 500 + 50 + 5



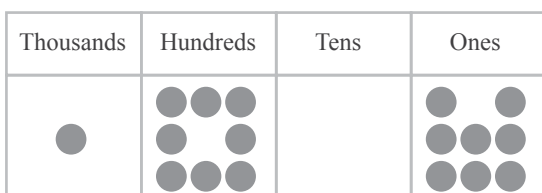
9,099

9,000 + 90 + 9



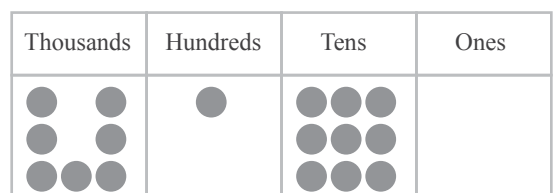
4,444

4,000 + 400 + 40 + 4



1,808

1,000 + 800 + 8



7,190

7,000 + 100 + 90