


# Height of Animals

Name: \_\_\_\_\_ Class: \_\_\_\_\_

Look at the height of the following animals and answer the questions with true or false. The pictures are not on scale.




6 ft 3 in



25 in



3 ft 1 in




5 ft 5 in

1. The penguin is 2 feet 1 inch tall?
2. The elephant is 1 foot taller than the hippo?
3. The rabbit is 9 inches taller than the penguin?
4. The hippo is 65 inches tall?
5. The total height of the elephant and the hippo is 11 feet 8 inches?
6. The total height of all 4 animals is less than 200 inches?
7. The elephant is 3 times taller than the penguin?

# Answers

Look at the height of the following animals and answer the questions with true or false. The pictures are not on scale.




6 ft 3 in



25 in



3 ft 1 in



5 ft 5 in

1. The penguin is 2 feet 1 inch tall?  
**true**
2. The elephant is 1 foot taller than the hippo?  
**false**
3. The rabbit is 9 inches taller than the penguin?  
**false**
4. The hippo is 65 inches tall?  
**true**
5. The total height of the elephant and the hippo is 11 feet 8 inches?  
**true**
6. The total height of all 4 animals is less than 200 inches?  
**false**
7. The elephant is 3 times taller than the penguin?  
**true**