


Adding and Subtracting Time

Name: _____ Class: _____

Read the clocks and add and subtract time.




What time is it on the clock? _____

What time will it be in 5 minutes? _____

What time will it be in 2 hours? _____

What time was it 20 minutes ago? _____




What time is it on the clock? _____

What time will it be in 30 minutes? _____

What time will it be in 3 hours? _____

What time was it 15 minutes ago? _____




What time is it on the clock? _____

What time will it be in 15 minutes? _____

What time will it be in 1 hour? _____

What time was it 30 minutes ago? _____



What time is it on the clock? _____


What time will it be in 10 minutes? _____

What time will it be in 2 hours? _____

What time was it 20 minutes ago? _____

Answers

Read the clocks and add and subtract time.



What time is it on the clock?

9.05

What time will it be in 5 minutes?


9.10

What time will it be in 2 hours?

11.05

What time was it 20 minutes ago?

8.45



What time is it on the clock?

7.15

What time will it be in 30 minutes?


7.45

What time will it be in 3 hours?

10.15

What time was it 15 minutes ago?

7.00



What time is it on the clock?

2.35

What time will it be in 15 minutes?


2.50

What time will it be in 1 hour?

3.35

What time was it 30 minutes ago?

2.05



What time is it on the clock?

5.55

What time will it be in 10 minutes?

6.05

What time will it be in 2 hours?

7.55

What time was it 20 minutes ago?

5.35