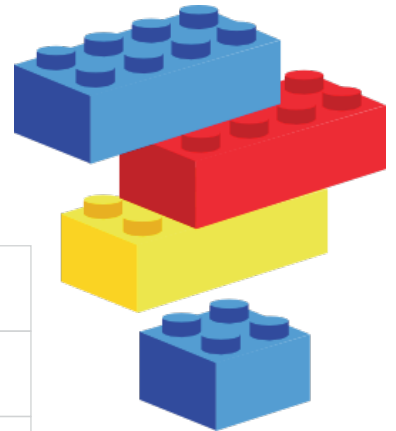


Lego Blocks

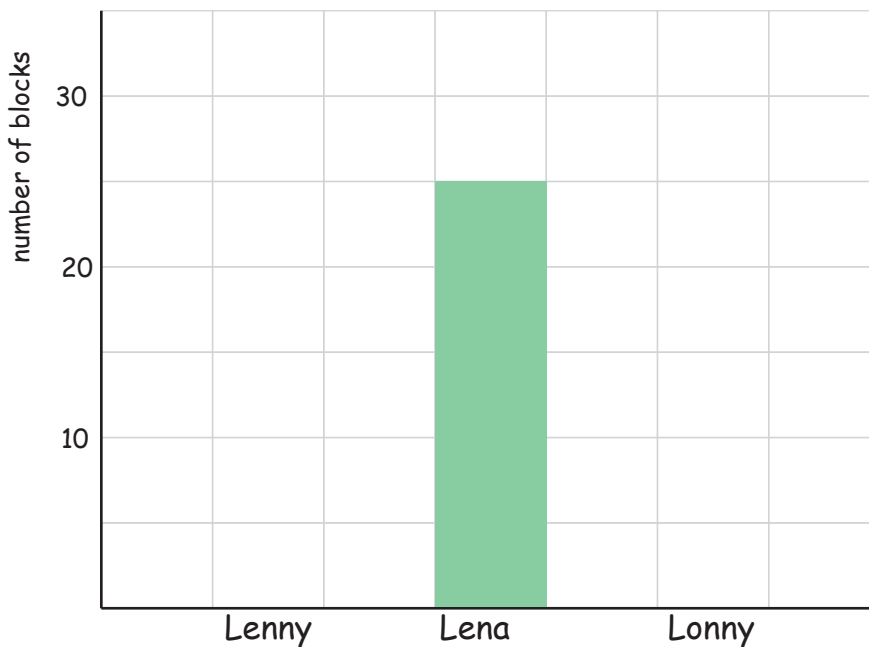
Name: _____ Score: _____

Lenny, Lena and Lonny wanted to build a very high Lego tower in school and brought some Lego blocks from home . The following table shows the number of blocks they brought. Use it to complete the bar graph and to answer the questions.

Lenny	Lena	Lonny
20	?	30



1) Complete the bar graph

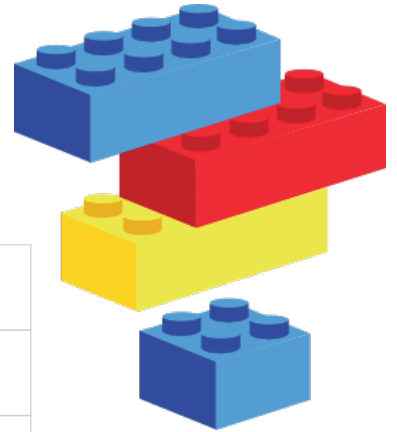


- 2) How many Lego blocks did Lena bring to school?
- 3) How many more blocks did Lonny bring than Lenny?
- 4) Did Lena bring 10 Lego blocks more to school than Lenny?
- 5) How many blocks did they bring altogether?

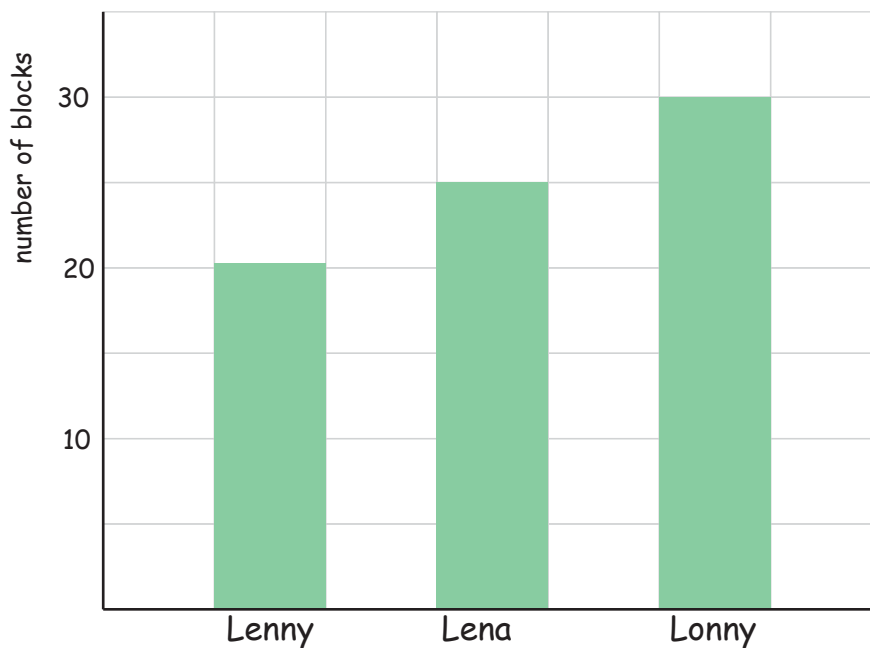
Answers

Lenny, Lena and Lonny wanted to build a very high Lego tower in school and brought some Lego blocks from home . The following table shows the number of blocks they brought. Use it to complete the bar graph and to answer the questions.

Lenny	Lena	Lonny
20	?	30



1) Complete the bar graph



2) How many Lego blocks did Lena bring to school?

25 Lego blocks

3) How many more blocks did Lonny bring than Lenny?

10 blocks

4) Did Lena bring 10 Lego blocks more to school than Lenny?

no

5) How many blocks did they bring altogether?

75 blocks