








Throwing Dice

Name: _____ Class: _____

Peter was a bit bored and decided to roll a dice 30 times and count the eyes he threw. The pictures below show you his results. Use these result to answer the questions.




1) Complete the data table

					
1					







- 2) Which number did Peter throw the most?
- 3) Which number did Peter throw only once?
- 4) How many times did Peter throw the dice?
- 5) How many times did he throw less than four eyes?
- 6) How many times did he throw a five and a six?

Answers

Peter was a bit bored and decided to roll a dice 30 times and count the eyes he threw. The pictures below show you his results. Use these result to answer the questions.



1) Complete the data table

					
1	5	4	5	7	8

2) Which number did Peter throw the most?

the six

3) Which number did Peter throw only once?

the one

4) How many times did Peter throw the dice?

30 times

5) How many times did he throw less than four eyes?

10 times

6) How many times did he throw a five and a six?

15 times