


Read the table and make Graph

The following data table shows the number of fish 4 friends caught on a fishing trip. Complete the picture graph and answer the questions.

Peter 4 fish	Maria 3 fish
John 6 fish	Janet 5 fish

Peter	
John	
Maria	
Janet	

Each  stands for 1 fish

How many fish did Maria catch ?

Who caught the most fish ?




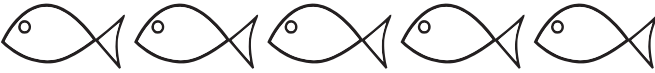
How many more fish did Janet catch than Peter ?

How many fish did they catch altogether ?

Read the table and make Graph

The following data table shows the number of fish 4 friends caught on a fishing trip. Complete the picture graph and answer the questions.

Peter 4 fish	Maria 3 fish
John 6 fish	Janet 5 fish

Peter	
John	
Maria	
Janet	

Each  stands for 1 fish

How many fish did Maria catch ?

3 fish

Who caught the most fish ?

John

How many more fish did Janet catch than Peter ?

1 fish

How many fish did they catch altogether ?

18 fish
