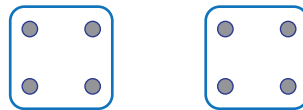


Multiplication Dice

Count the dice and pips and complete the multiplication facts



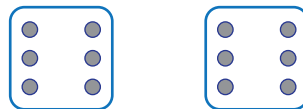
$$2 \times 3 = \square$$



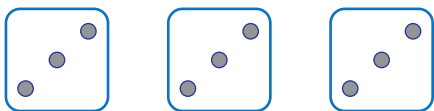
$$\square \times \square = \square$$



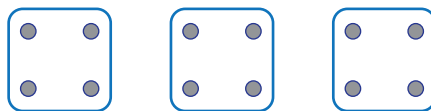
$$\square \times \square = \square$$




$$\square \times \square = \square$$




$$\square \times \square = \square$$



$$\square \times \square = \square$$



$$\square \times \square = \square$$



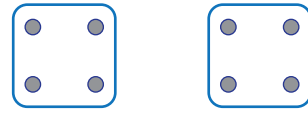
$$\square \times \square = \square$$

Multiplication Dice

Count the dice and pips and complete the multiplication facts



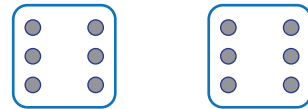
$$2 \times 3 = 6$$




$$2 \times 4 = 8$$



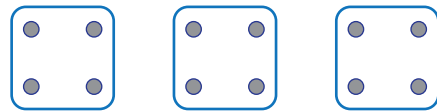
$$2 \times 5 = 10$$




$$2 \times 6 = 12$$




$$3 \times 3 = 9$$



$$3 \times 4 = 12$$



$$3 \times 5 = 15$$



$$3 \times 6 = 18$$