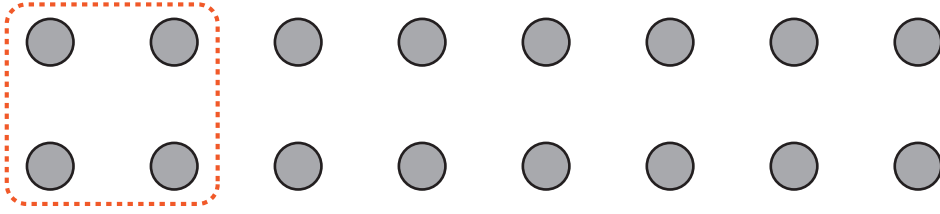


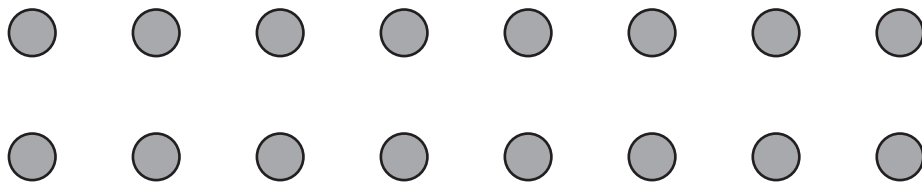
Making groups of 2, 4 and 8

Circle groups of dots to show your workings



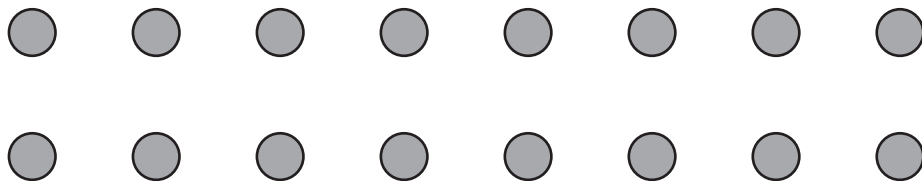
How many dots are there in total ? _____

How many groups of 4 dots can you make ? _____



How many dots are there in total ? _____

How many groups of 8 dots can you make ? _____

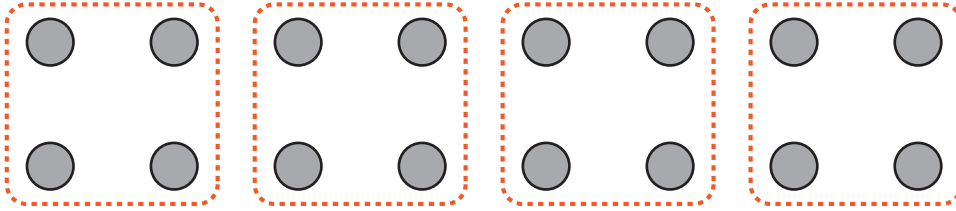


How many dots are there in total ? _____

How many groups of 2 dots can you make ? _____

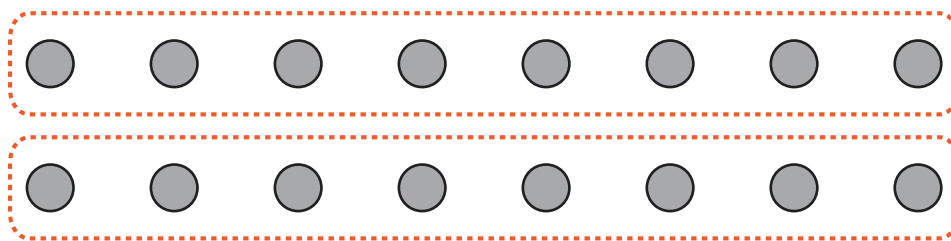
Making groups of 2, 4 and 8

Circle groups of dots to show your workings



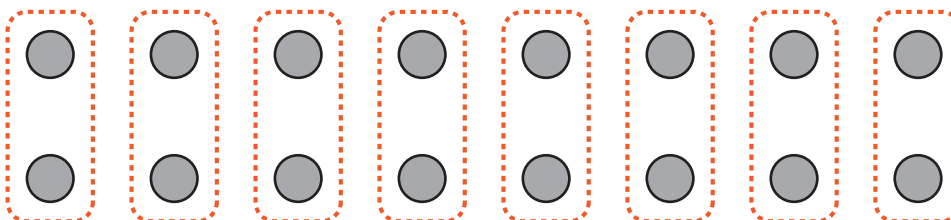
How many dots are there in total ? 16

How many groups of 4 dots can you make ? 4



How many dots are there in total ? 16

How many groups of 8 dots can you make ? 2



How many dots are there in total ? 16

How many groups of 2 dots can you make ? 8
