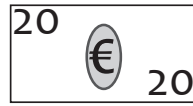
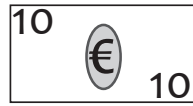
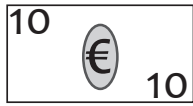
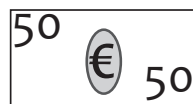
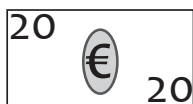
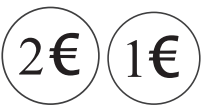
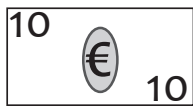
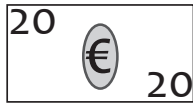
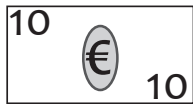
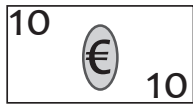
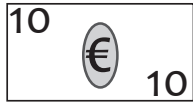


Counting money?

Count the banknotes, and write your answer in Euro.

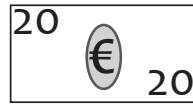
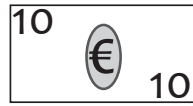
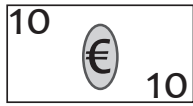


_____ Euro

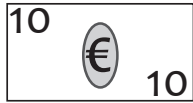


Counting money?

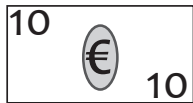
Count the banknotes, and write your answer in Euro.



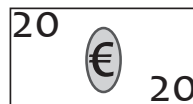
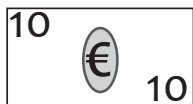
40 Euro



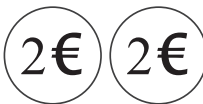
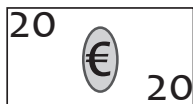
17 Euro



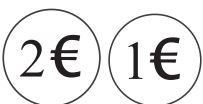
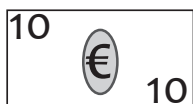
18 Euro



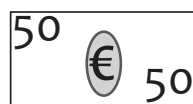
50 Euro



34 Euro



23 Euro



90 Euro



11 Euro