



















Money Pictograph

The pictograph shows the price of some items in a supermarket in Euro. Use the graph to answer the questions.

cheese	   
shampoo	     
cereals	    
bread	  

Each  stands for 1 Euro

What is the price of the bread ?

How much does the shampoo cost ?

How much will you pay if you buy the cheese and cereals ?

Which item is 1 Euro cheaper than the cheese ?

If you have 18 Euro, can you buy all 4 items ?

Money Pictograph

The pictograph shows the price of some items in a supermarket in Euro. Use the graph to answer the questions.

cheese	1€ 1€ 1€ 1€
shampoo	1€ 1€ 1€ 1€ 1€ 1€
cereals	1€ 1€ 1€ 1€ 1€
bread	1€ 1€ 1€

Each 1€ stands for 1 Euro

What is the price of the bread ?

3 Euro

How much does the shampoo cost ?

6 Euro

How much will you pay if you buy the cheese and cereals ?

9 Euro

Which item is 1 Euro cheaper than the cheese ?

The bread

If you have 18 Euro, can you buy all 4 items ?

Yes
