


Multiplication Dice

Name: _____ Class: _____

Look at the dice and fill in the blanks.

1)



There are _____ dice.

There are _____ pips on each dice.

There are _____ pips altogether.

Multiplication sentence: _____

2)




There are _____ dice.

There are _____ pips on each dice.

There are _____ pips altogether.

Multiplication sentence: _____

3)




There are _____ dice.

There are _____ pips on each dice.

There are _____ pips altogether.

Multiplication sentence: _____

4)



There are _____ dice.

There are _____ pips on each dice.


There are _____ pips altogether.

Multiplication sentence: _____

Answers

Look at the dice and fill in the blanks.

1)



There are 6 dice.

There are 5 pips on each dice.

There are 30 pips altogether.

Multiplication sentence: $6 \times 5 = 30$

2)




There are 5 dice.

There are 4 pips on each dice.

There are 20 pips altogether.

Multiplication sentence: $5 \times 4 = 20$

3)



There are 4 dice.

There are 6 pips on each dice.

There are 24 pips altogether.

Multiplication sentence: $4 \times 6 = 24$

4)



There are 4 dice.

There are 5 pips on each dice.

There are 20 pips altogether.

Multiplication sentence: $4 \times 5 = 20$