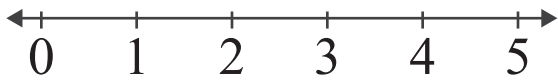


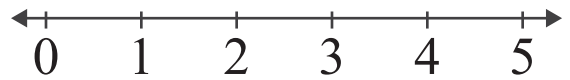
Number Lines: Sum up to 5

Name: _____ Score: _____

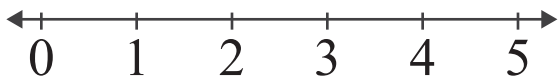
Add the numbers and use the number line to show how to find the sum.



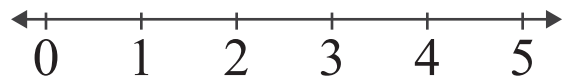
$1 + 2 = \square$



$2 + 3 = \square$



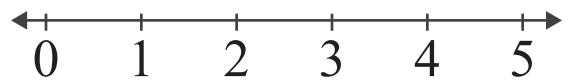
$4 + 1 = \square$



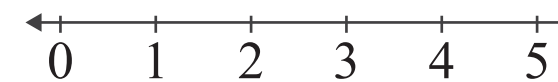
$2 + 2 = \square$



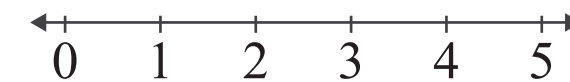
$1 + 3 = \square$



$2 + 1 = \square$



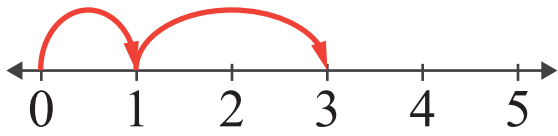
$3 + 2 = \square$



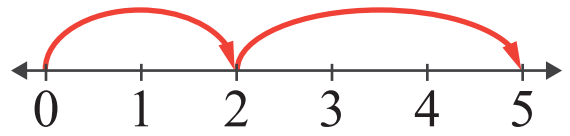
$3 + 1 = \square$

Answers

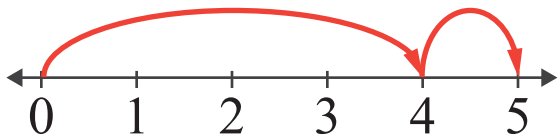
Add the numbers and use the number line to show how to find the sum.



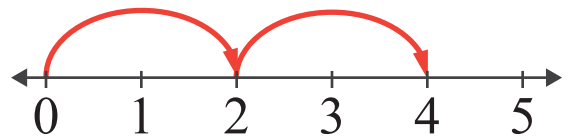
$$1 + 2 = \boxed{3}$$



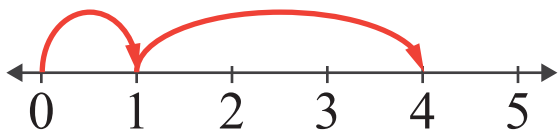
$$2 + 3 = \boxed{5}$$



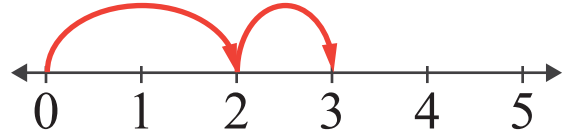
$$4 + 1 = \boxed{5}$$



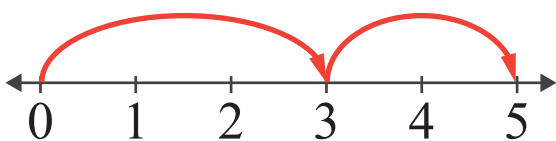
$$2 + 2 = \boxed{4}$$



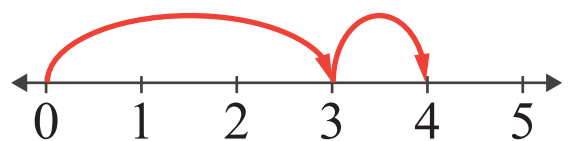
$$1 + 3 = \boxed{4}$$



$$2 + 1 = \boxed{3}$$



$$3 + 2 = \boxed{5}$$



$$3 + 1 = \boxed{4}$$